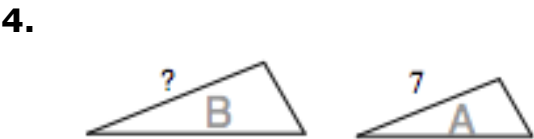
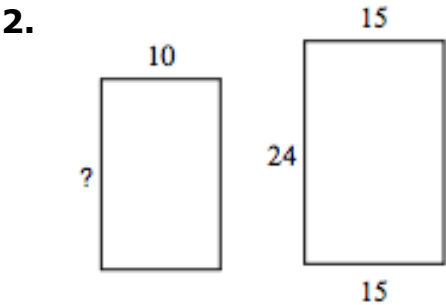
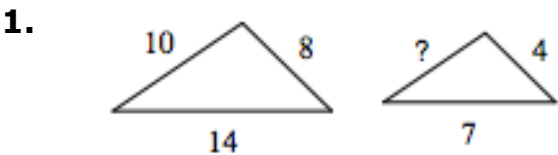


Scaling Similar Figures

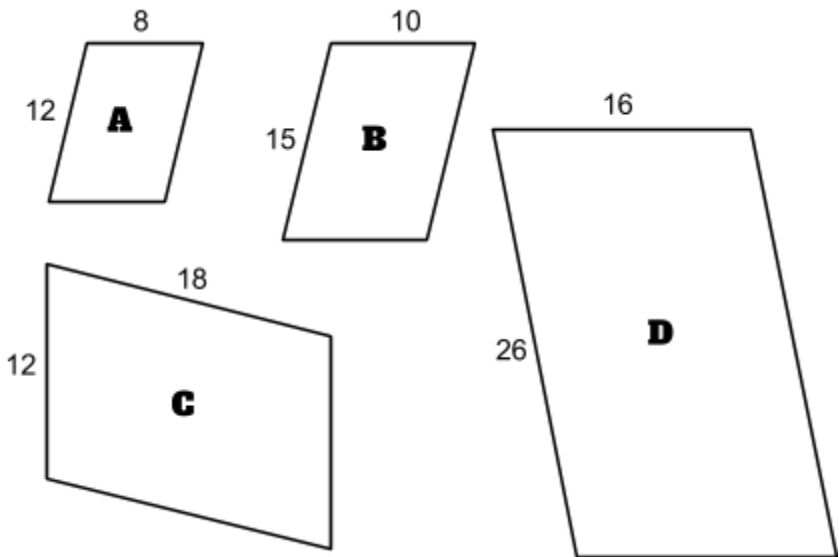
Each pair of figures below is similar. Find the each missing side length below.



Find the missing side length if the scale factor from A to B is 3

Find the missing side length if the scale factor from A to B is 1.5

5. For each quadrilateral below, write the ratio of short side to long side. Then, divide to determine which quadrilaterals are similar.



Ratio A _____

Ratio B _____

Ratio C _____

Ratio D _____

Which quadrilaterals are similar?
