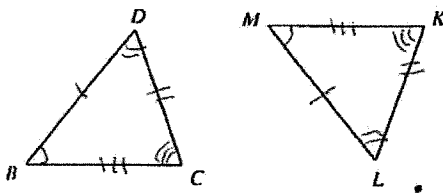
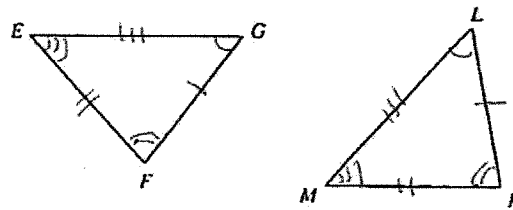


Mark the angles and sides of each pair of triangles to indicate that they are congruent.

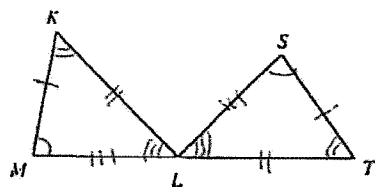
13) $\Delta BDC \cong \Delta MLK$



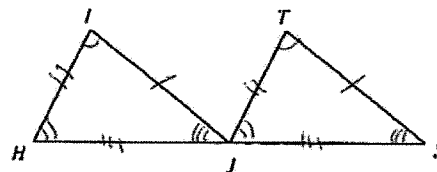
14) $\Delta GFE \cong \Delta LKM$



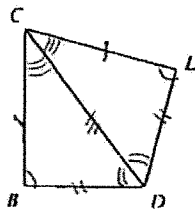
15) $\Delta MKL \cong \Delta STL$



16) $\Delta HIJ \cong \Delta JTS$



17) $\Delta CDB \cong \Delta CDL$



18) $\Delta JIK \cong \Delta JCD$

