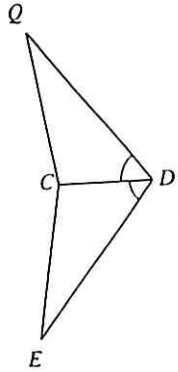
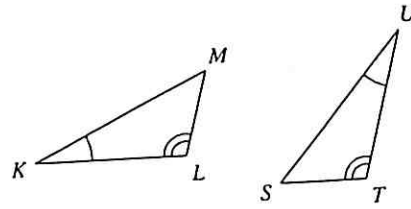


State what additional information is required in order to know that the triangles are congruent for the reason given.

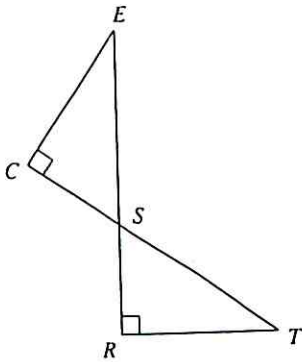
6) ASA



7) ASA



8) ASA



9) ASA

