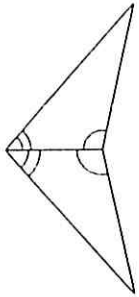


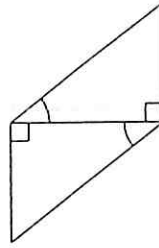
ASA and AAS Congruence

State if the two triangles are congruent. If they are, state how you know.

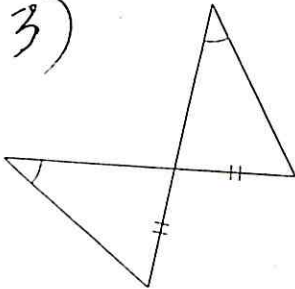
1)



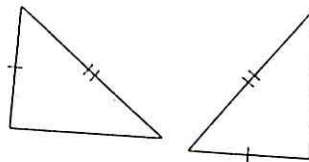
2)



3)



4)



5)

