



# SAT<sup>®</sup> Practice Test #2

## IMPORTANT REMINDERS

**1**

**A No. 2 pencil is required for the test.  
Do not use a mechanical pencil or pen.**

**2**

**Sharing any questions with anyone  
is a violation of Test Security  
and Fairness policies and may result  
in your scores being canceled.**

**This cover is representative of what you'll see on test day.**

**THIS TEST BOOK MUST NOT BE TAKEN FROM THE ROOM. UNAUTHORIZED  
REPRODUCTION OR USE OF ANY PART OF THIS TEST BOOK IS PROHIBITED.**

© 2015 The College Board. College Board, SAT, and the acorn logo are registered trademarks of the College Board.



**Test begins on the next page.**

# Reading Test

65 MINUTES, 52 QUESTIONS

Turn to Section 1 of your answer sheet to answer the questions in this section.

## DIRECTIONS

Each passage or pair of passages below is followed by a number of questions. After reading each passage or pair, choose the best answer to each question based on what is stated or implied in the passage or passages and in any accompanying graphics (such as a table or graph).

### Questions 1-10 are based on the following passage.

This passage is from Charlotte Brontë, *The Professor*, originally published in 1857.

No man likes to acknowledge that he has made a mistake in the choice of his profession, and every man, worthy of the name, will row long against wind and tide before he allows himself to cry out, “I am baffled!” and submits to be floated passively back to land. From the first week of my residence in X—I felt my occupation irksome. The thing itself—the work of copying and translating business-letters—was a dry and tedious task enough, but had that been all, I should long have borne with the nuisance; I am not of an impatient nature, and influenced by the double desire of getting my living and justifying to myself and others the resolution I had taken to become a tradesman, I should have endured in silence the rust and cramp of my best faculties; I should not have whispered, even inwardly, that I longed for liberty; I should have pent in every sigh by which my heart might have ventured to intimate its distress under the closeness, smoke, monotony, and joyless tumult of Bigben Close, and its panting desire for freer and fresher scenes; I should have set up the image of Duty, the fetish of Perseverance, in my small bedroom at Mrs. King’s lodgings, and they two should have been my household gods, from which

my darling, my cherished-in-secret, Imagination, the tender and the mighty, should never, either by softness or strength, have severed me. But this was not all; the antipathy which had sprung up between myself and my employer striking deeper root and spreading denser shade daily, excluded me from every glimpse of the sunshine of life; and I began to feel like a plant growing in humid darkness out of the slimy walls of a well.

Antipathy is the only word which can express the feeling Edward Crimsworth had for me—a feeling, in a great measure, involuntary, and which was liable to be excited by every, the most trifling movement, look, or word of mine. My southern accent annoyed him; the degree of education evinced in my language irritated him; my punctuality, industry, and accuracy, fixed his dislike, and gave it the high flavour and poignant relish of envy; he feared that I too should one day make a successful tradesman. Had I been in anything inferior to him, he would not have hated me so thoroughly, but I knew all that he knew, and, what was worse, he suspected that I kept the padlock of silence on mental wealth in which he was no sharer. If he could have once placed me in a ridiculous or mortifying position, he would have forgiven me much, but I was guarded by three faculties—Caution, Tact, Observation; and prowling and prying as was Edward’s malignity, it could never baffle the lynx-eyes of these, my natural sentinels. Day by day did his malice watch my tact, hoping it would sleep, and prepared to steal snake-like on its slumber; but tact, if it be genuine, never sleeps.

I had received my first quarter's wages, and was returning to my lodgings, possessed heart and soul with the pleasant feeling that the master who had paid me grudged every penny of that hard-earned pittance—I had long ceased to regard Mr. Crimsworth as my brother—he was a hard, grinding master; he wished to be an inexorable tyrant: that was all). Thoughts, not varied but strong, occupied my mind; two voices spoke within me; again and again they uttered the same monotonous phrases. One said: "William, your life is intolerable." The other: "What can you do to alter it?" I walked fast, for it was a cold, frosty night in January; as I approached my lodgings, I turned from a general view of my affairs to the particular speculation as to whether my fire would be out; looking towards the window of my sitting-room, I saw no cheering red gleam.

1

Which choice best summarizes the passage?

- A) A character describes his dislike for his new job and considers the reasons why.
- B) Two characters employed in the same office become increasingly competitive.
- C) A young man regrets privately a choice that he defends publicly.
- D) A new employee experiences optimism, then frustration, and finally despair.

2

The main purpose of the opening sentence of the passage is to

- A) establish the narrator's perspective on a controversy.
- B) provide context useful in understanding the narrator's emotional state.
- C) offer a symbolic representation of Edward Crimsworth's plight.
- D) contrast the narrator's good intentions with his malicious conduct.

3

During the course of the first paragraph, the narrator's focus shifts from

- A) recollection of past confidence to acknowledgment of present self-doubt.
- B) reflection on his expectations of life as a tradesman to his desire for another job.
- C) generalization about job dissatisfaction to the specifics of his own situation.
- D) evaluation of factors making him unhappy to identification of alternatives.

4

The references to "shade" and "darkness" at the end of the first paragraph mainly have which effect?

- A) They evoke the narrator's sense of dismay.
- B) They reflect the narrator's sinister thoughts.
- C) They capture the narrator's fear of confinement.
- D) They reveal the narrator's longing for rest.

5

The passage indicates that Edward Crimsworth's behavior was mainly caused by his

- A) impatience with the narrator's high spirits.
- B) scorn of the narrator's humble background.
- C) indignation at the narrator's rash actions.
- D) jealousy of the narrator's apparent superiority.

6

The passage indicates that when the narrator began working for Edward Crimsworth, he viewed Crimsworth as a

- A) harmless rival.
- B) sympathetic ally.
- C) perceptive judge.
- D) demanding mentor.

7

Which choice provides the best evidence for the answer to the previous question?

- A) Lines 28-31 (“the antipathy . . . life”)
- B) Lines 38-40 (“My southern . . . irritated him”)
- C) Lines 54-56 (“Day . . . slumber”)
- D) Lines 61-62 (“I had . . . brother”)

8

At the end of the second paragraph, the comparisons of abstract qualities to a lynx and a snake mainly have the effect of

- A) contrasting two hypothetical courses of action.
- B) conveying the ferocity of a resolution.
- C) suggesting the likelihood of an altercation.
- D) illustrating the nature of an adversarial relationship.

9

The passage indicates that, after a long day of work, the narrator sometimes found his living quarters to be

- A) treacherous.
- B) dreary.
- C) predictable.
- D) intolerable.

10

Which choice provides the best evidence for the answer to the previous question?

- A) Lines 17-21 (“I should . . . scenes”)
- B) Lines 21-23 (“I should . . . lodgings”)
- C) Lines 64-67 (“Thoughts . . . phrases”)
- D) Lines 68-74 (“I walked . . . gleam”)

**Questions 11-21 are based on the following passage and supplementary material.**

This passage is adapted from Iain King, “Can Economics Be Ethical?” ©2013 by Prospect Publishing.

Recent debates about the economy have rediscovered the question, “is that right?”, where “right” means more than just profits or efficiency.

Line Some argue that because the free markets allow  
5 for personal choice, they are already ethical. Others have accepted the ethical critique and embraced corporate social responsibility. But before we can label any market outcome as “immoral,” or sneer at economists who try to put a price on being ethical,  
10 we need to be clear on what we are talking about.

There are different views on where ethics should apply when someone makes an economic decision. Consider Adam Smith, widely regarded as the founder of modern economics. He was a moral  
15 philosopher who believed sympathy for others was the basis for ethics (we would call it empathy nowadays). But one of his key insights in *The Wealth of Nations* was that acting on this empathy could be counter-productive—he observed people becoming  
20 better off when they put their own empathy aside, and interacted in a self-interested way. Smith justifies selfish behavior by the outcome. Whenever planners use cost-benefit analysis to justify a new railway line, or someone restrains to boost his or her earning  
25 power, or a shopper buys one to get one free, they are using the same approach: empathizing with someone, and seeking an outcome that makes that person as well off as possible—although the person they are empathizing with may be themselves in the  
30 future.

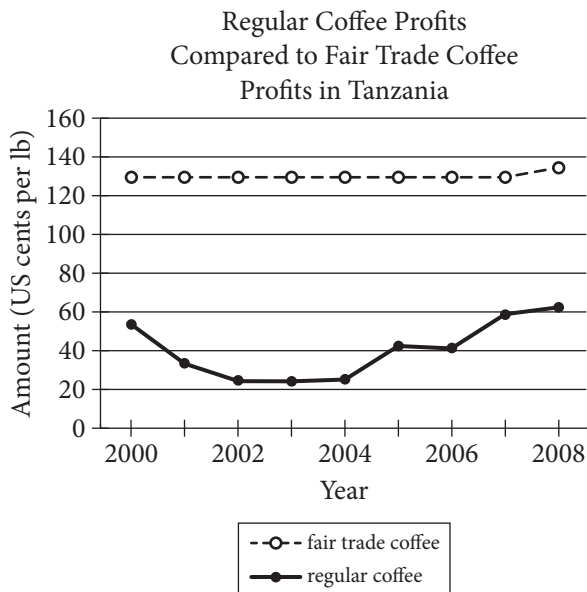
Instead of judging consequences, Aristotle said ethics was about having the right character—displaying virtues like courage and honesty. It is a view put into practice whenever  
35 business leaders are chosen for their good character. But it is a hard philosophy to teach—just how much loyalty should you show to a manufacturer that keeps losing money? Show too little and you’re a “greed is good” corporate raider; too much and you’re wasting  
40 money on unproductive capital. Aristotle thought there was a golden mean between the two extremes, and finding it was a matter of fine judgment. But if ethics is about character, it’s not clear what those characteristics should be.

45 There is yet another approach: instead of rooting ethics in character or the consequences of actions, we can focus on our actions themselves. From this perspective some things are right, some wrong—we should buy fair trade goods, we shouldn’t tell lies in  
50 advertisements. Ethics becomes a list of commandments, a catalog of “dos” and “don’ts.” When a finance official refuses to devalue a currency because they have promised not to, they are defining ethics this way. According to this approach  
55 devaluation can still be bad, even if it would make everybody better off.

Many moral dilemmas arise when these three versions pull in different directions but clashes are not inevitable. Take fair trade coffee (coffee that is  
60 sold with a certification that indicates the farmers and workers who produced it were paid a fair wage), for example: buying it might have good consequences, be virtuous, and also be the right way to act in a flawed market. Common ground like this  
65 suggests that, even without agreement on where ethics applies, ethical economics is still possible.

Whenever we feel queasy about “perfect” competitive markets, the problem is often rooted in a phony conception of people. The model of man on  
70 which classical economics is based—an entirely rational and selfish being—is a parody, as John Stuart Mill, the philosopher who pioneered the model, accepted. Most people—even economists—now accept that this “economic man” is a fiction.  
75 We behave like a herd; we fear losses more than we hope for gains; rarely can our brains process all the relevant facts.

These human quirks mean we can never make purely “rational” decisions. A new wave of behavioral  
80 economists, aided by neuroscientists, is trying to understand our psychology, both alone and in groups, so they can anticipate our decisions in the marketplace more accurately. But psychology can also help us understand why we react in disgust at  
85 economic injustice, or accept a moral law as universal. Which means that the relatively new science of human behavior might also define ethics for us. Ethical economics would then emerge from one of the least likely places: economists themselves.



Adapted from the Fair Trade Vancouver website.

11

The main purpose of the passage is to

- A) consider an ethical dilemma posed by cost-benefit analysis.
- B) describe a psychology study of ethical economic behavior.
- C) argue that the free market prohibits ethical economics.
- D) examine ways of evaluating the ethics of economics.

12

In the passage, the author anticipates which of the following objections to criticizing the ethics of free markets?

- A) Smith's association of free markets with ethical behavior still applies today.
- B) Free markets are the best way to generate high profits, so ethics are a secondary consideration.
- C) Free markets are ethical because they are made possible by devalued currency.
- D) Free markets are ethical because they enable individuals to make choices.

13

Which choice provides the best evidence for the answer to the previous question?

- A) Lines 4-5 ("Some . . . ethical")
- B) Lines 7-10 ("But . . . about")
- C) Lines 21-22 ("Smith . . . outcome")
- D) Lines 52-54 ("When . . . way")



14

As used in line 6, “embraced” most nearly means

- A) lovingly held.
- B) readily adopted.
- C) eagerly hugged.
- D) reluctantly used.

15

The main purpose of the fifth paragraph (lines 45-56) is to

- A) develop a counterargument to the claim that greed is good.
- B) provide support for the idea that ethics is about character.
- C) describe a third approach to defining ethical economics.
- D) illustrate that one’s actions are a result of one’s character.

16

As used in line 58, “clashes” most nearly means

- A) conflicts.
- B) mismatches.
- C) collisions.
- D) brawls.

17

Which choice best supports the author’s claim that there is common ground shared by the different approaches to ethics described in the passage?

- A) Lines 11-12 (“There . . . decision”)
- B) Lines 47-50 (“From . . . advertisements”)
- C) Lines 59-64 (“Take . . . market”)
- D) Lines 75-77 (“We . . . facts”)

18

The main idea of the final paragraph is that

- A) human quirks make it difficult to predict people’s ethical decisions accurately.
- B) people universally react with disgust when faced with economic injustice.
- C) understanding human psychology may help to define ethics in economics.
- D) economists themselves will be responsible for reforming the free market.

19

Data in the graph about per-pound coffee profits in Tanzania most strongly support which of the following statements?

- A) Fair trade coffee consistently earned greater profits than regular coffee earned.
- B) The profits earned from regular coffee did not fluctuate.
- C) Fair trade coffee profits increased between 2004 and 2006.
- D) Fair trade and regular coffee were earning equal profits by 2008.

20

Data in the graph indicate that the greatest difference between per-pound profits from fair trade coffee and those from regular coffee occurred during which period?

- A) 2000 to 2002
- B) 2002 to 2004
- C) 2004 to 2005
- D) 2006 to 2008

21

Data in the graph provide most direct support for which idea in the passage?

- A) Acting on empathy can be counterproductive.
- B) Ethical economics is defined by character.
- C) Ethical economics is still possible.
- D) People fear losses more than they hope for gains.

**Questions 22-32 are based on the following passages.**

Passage 1 is adapted from Nicholas Carr, "Author Nicholas Carr: The Web Shatters Focus, Rewires Brains." ©2010 by Condé Nast. Passage 2 is from Steven Pinker, "Mind over Mass Media." ©2010 by The New York Times Company.

**Passage 1**

The mental consequences of our online info-crunching are not universally bad.

Certain cognitive skills are strengthened by our use of computers and the Net. These tend to involve  
*Line* 5 more primitive mental functions, such as hand-eye coordination, reflex response, and the processing of visual cues. One much-cited study of video gaming revealed that after just 10 days of playing action games on computers, a group of young people had  
*10* significantly boosted the speed with which they could shift their visual focus between various images and tasks.

It's likely that Web browsing also strengthens brain functions related to fast-paced problem  
*15* solving, particularly when it requires spotting patterns in a welter of data. A British study of the way women search for medical information online indicated that an experienced Internet user can, at least in some cases, assess the trustworthiness and  
*20* probable value of a Web page in a matter of seconds. The more we practice surfing and scanning, the more adept our brain becomes at those tasks.

But it would be a serious mistake to look narrowly at such benefits and conclude that the Web is making  
*25* us smarter. In a *Science* article published in early 2009, prominent developmental psychologist Patricia Greenfield reviewed more than 40 studies of the effects of various types of media on intelligence and learning ability. She concluded that "every medium  
*30* develops some cognitive skills at the expense of others." Our growing use of the Net and other screen-based technologies, she wrote, has led to the "widespread and sophisticated development of visual-spatial skills." But those gains go hand in hand  
*35* with a weakening of our capacity for the kind of "deep processing" that underpins "mindful knowledge acquisition, inductive analysis, critical thinking, imagination, and reflection."

We know that the human brain is highly  
*40* plastic; neurons and synapses change as circumstances change. When we adapt to a new cultural phenomenon, including the use of a new

medium, we end up with a different brain, says Michael Merzenich, a pioneer of the field of  
 45 neuroplasticity. That means our online habits continue to reverberate in the workings of our brain cells even when we're not at a computer. We're exercising the neural circuits devoted to skimming and multitasking while ignoring those used for  
 50 reading and thinking deeply.

### Passage 2

Critics of new media sometimes use science itself to press their case, citing research that shows how "experience can change the brain." But cognitive neuroscientists roll their eyes at such talk. Yes, every  
 55 time we learn a fact or skill the wiring of the brain changes; it's not as if the information is stored in the pancreas. But the existence of neural plasticity does not mean the brain is a blob of clay pounded into shape by experience.

60 Experience does not revamp the basic information-processing capacities of the brain. Speed-reading programs have long claimed to do just that, but the verdict was rendered by Woody Allen after he read Leo Tolstoy's famously long novel  
 65 *War and Peace* in one sitting: "It was about Russia." Genuine multitasking, too, has been exposed as a myth, not just by laboratory studies but by the familiar sight of an SUV undulating between lanes as the driver cuts deals on his cell phone.

70 Moreover, the effects of experience are highly specific to the experiences themselves. If you train people to do one thing (recognize shapes, solve math puzzles, find hidden words), they get better at doing that thing, but almost nothing else. Music doesn't  
 75 make you better at math, conjugating Latin doesn't make you more logical, brain-training games don't make you smarter. Accomplished people don't bulk up their brains with intellectual calisthenics; they immerse themselves in their fields. Novelists read  
 80 lots of novels, scientists read lots of science.

The effects of consuming electronic media are likely to be far more limited than the panic implies. Media critics write as if the brain takes on the qualities of whatever it consumes, the informational  
 85 equivalent of "you are what you eat." As with ancient peoples who believed that eating fierce animals made them fierce, they assume that watching quick cuts in rock videos turns your mental life into quick cuts or that reading bullet points and online postings turns  
 90 your thoughts into bullet points and online postings.

22

The author of Passage 1 indicates which of the following about the use of screen-based technologies?

- A) It should be thoroughly studied.
- B) It makes the brain increasingly rigid.
- C) It has some positive effects.
- D) It should be widely encouraged.

23

Which choice provides the best evidence for the answer to the previous question?

- A) Lines 3-4 ("Certain . . . Net")
- B) Lines 23-25 ("But . . . smarter")
- C) Lines 25-29 ("In a . . . ability")
- D) Lines 29-31 ("She . . . others")

24

The author of Passage 1 indicates that becoming adept at using the Internet can

- A) make people complacent about their health.
- B) undermine the ability to think deeply.
- C) increase people's social contacts.
- D) improve people's self-confidence.

25

As used in line 40, "plastic" most nearly means

- A) creative.
- B) artificial.
- C) malleable.
- D) sculptural.

26

The author of Passage 2 refers to the novel *War and Peace* primarily to suggest that Woody Allen

- A) did not like Tolstoy's writing style.
- B) could not comprehend the novel by speed-reading it.
- C) had become quite skilled at multitasking.
- D) regretted having read such a long novel.

27

According to the author of Passage 2, what do novelists and scientists have in common?

- A) They take risks when they pursue knowledge.
- B) They are eager to improve their minds.
- C) They are curious about other subjects.
- D) They become absorbed in their own fields.

28

The analogy in the final sentence of Passage 2 has primarily which effect?

- A) It uses ornate language to illustrate a difficult concept.
- B) It employs humor to soften a severe opinion of human behavior.
- C) It alludes to the past to evoke a nostalgic response.
- D) It criticizes the view of a particular group.

29

The main purpose of each passage is to

- A) compare brain function in those who play games on the Internet and those who browse on it.
- B) report on the problem-solving skills of individuals with varying levels of Internet experience.
- C) take a position on increasing financial support for studies related to technology and intelligence.
- D) make an argument about the effects of electronic media use on the brain.

30

Which choice best describes the relationship between the two passages?

- A) Passage 2 relates first-hand experiences that contrast with the clinical approach in Passage 1.
- B) Passage 2 critiques the conclusions drawn from the research discussed in Passage 1.
- C) Passage 2 takes a high-level view of a result that Passage 1 examines in depth.
- D) Passage 2 predicts the negative reactions that the findings discussed in Passage 1 might produce.

31

On which of the following points would the authors of both passages most likely agree?

- A) Computer-savvy children tend to demonstrate better hand-eye coordination than do their parents.
- B) Those who criticize consumers of electronic media tend to overreact in their criticism.
- C) Improved visual-spatial skills do not generalize to improved skills in other areas.
- D) Internet users are unlikely to prefer reading onscreen text to reading actual books.

32

Which choice provides the best evidence that the author of Passage 2 would agree to some extent with the claim attributed to Michael Merzenich in lines 41-43, Passage 1?

- A) Lines 51-53 ("Critics . . . brain")
- B) Lines 54-56 ("Yes . . . changes")
- C) Lines 57-59 ("But . . . experience")
- D) Lines 83-84 ("Media . . . consumes")

**Questions 33-42 are based on the following passage.**

This passage is adapted from Elizabeth Cady Stanton's address to the 1869 Woman Suffrage Convention in Washington, DC.

I urge a sixteenth amendment, because "manhood suffrage," or a man's government, is civil, religious, and social disorganization. The male element is a destructive force, stern, selfish, aggrandizing, loving war, violence, conquest, acquisition, breeding in the material and moral world alike discord, disorder, disease, and death. See what a record of blood and cruelty the pages of history reveal! Through what slavery, slaughter, and sacrifice, through what inquisitions and imprisonments, pains and persecutions, black codes and gloomy creeds, the soul of humanity has struggled for the centuries, while mercy has veiled her face and all hearts have been dead alike to love and hope!

The male element has held high carnival thus far; it has fairly run riot from the beginning, overpowering the feminine element everywhere, crushing out all the diviner qualities in human nature, until we know but little of true manhood and womanhood, of the latter comparatively nothing, for it has scarce been recognized as a power until within the last century. Society is but the reflection of man himself, untempered by woman's thought; the hard iron rule we feel alike in the church, the state, and the home. No one need wonder at the disorganization, at the fragmentary condition of everything, when we remember that man, who represents but half a complete being, with but half an idea on every subject, has undertaken the absolute control of all sublunary matters.

People object to the demands of those whom they choose to call the strong-minded, because they say "the right of suffrage will make the women masculine." That is just the difficulty in which we are involved today. Though disfranchised, we have few women in the best sense; we have simply so many reflections, varieties, and dilutions of the masculine gender. The strong, natural characteristics of womanhood are repressed and ignored in

dependence, for so long as man feeds woman she will try to please the giver and adapt herself to his condition. To keep a foothold in society, woman must be as near like man as possible, reflect his ideas, opinions, virtues, motives, prejudices, and vices. She must respect his statutes, though they strip her of every inalienable right, and conflict with that higher law written by the finger of God on her own soul. . . .

[M]an has been molding woman to his ideas by direct and positive influences, while she, if not a negation, has used indirect means to control him, and in most cases developed the very characteristics both in him and herself that needed repression. And now man himself stands appalled at the results of his own excesses, and mourns in bitterness that falsehood, selfishness, and violence are the law of life. The need of this hour is not territory, gold mines, railroads, or specie payments but a new evangel of womanhood, to exalt purity, virtue, morality, true religion, to lift man up into the higher realms of thought and action.

We ask woman's enfranchisement, as the first step toward the recognition of that essential element in government that can only secure the health, strength, and prosperity of the nation. Whatever is done to lift woman to her true position will help to usher in a new day of peace and perfection for the race.

In speaking of the masculine element, I do not wish to be understood to say that all men are hard, selfish, and brutal, for many of the most beautiful spirits the world has known have been clothed with manhood; but I refer to those characteristics, though often marked in woman, that distinguish what is called the stronger sex. For example, the love of acquisition and conquest, the very pioneers of civilization, when expended on the earth, the sea, the elements, the riches and forces of nature, are powers of destruction when used to subjugate one man to another or to sacrifice nations to ambition.

Here that great conservator of woman's love, if permitted to assert itself, as it naturally would in freedom against oppression, violence, and war, would hold all these destructive forces in check, for woman knows the cost of life better than man does, and not with her consent would one drop of blood ever be shed, one life sacrificed in vain.

33

The central problem that Stanton describes in the passage is that women have been

- A) denied equal educational opportunities, which has kept them from reaching their potential.
- B) prevented from exerting their positive influence on men, which has led to societal breakdown.
- C) prevented from voting, which has resulted in poor candidates winning important elections.
- D) blocked by men from serving as legislators, which has allowed the creation of unjust laws.

34

Stanton uses the phrase “high carnival” (line 15) mainly to emphasize what she sees as the

- A) utter domination of women by men.
- B) freewheeling spirit of the age.
- C) scandalous decline in moral values.
- D) growing power of women in society.

35

Stanton claims that which of the following was a relatively recent historical development?

- A) The control of society by men
- B) The spread of war and injustice
- C) The domination of domestic life by men
- D) The acknowledgment of women’s true character

36

Which choice provides the best evidence for the answer to the previous question?

- A) Lines 3-7 (“The male . . . death”)
- B) Lines 15-22 (“The male . . . century”)
- C) Lines 22-25 (“Society . . . home”)
- D) Lines 48-52 (“[M]an . . . repression”)

37

As used in line 24, “rule” most nearly refers to

- A) a general guideline.
- B) a controlling force.
- C) an established habit.
- D) a procedural method.

38

It can reasonably be inferred that “the strong-minded” (line 32) was a term generally intended to

- A) praise women who fight for their long-denied rights.
- B) identify women who demonstrate intellectual skill.
- C) criticize women who enter male-dominated professions.
- D) condemn women who agitate for the vote for their sex.

39

As used in line 36, “best” most nearly means

- A) superior.
- B) excellent.
- C) genuine.
- D) rarest.

40

Stanton contends that the situation she describes in the passage has become so dire that even men have begun to

- A) lament the problems they have created.
- B) join the call for woman suffrage.
- C) consider women their social equals.
- D) ask women how to improve civic life.

41

Which choice provides the best evidence for the answer to the previous question?

- A) Lines 25-30 (“No one . . . matters”)
- B) Lines 53-55 (“And now . . . life”)
- C) Lines 56-60 (“The need . . . action”)
- D) Lines 61-64 (“We ask . . . nation”)

42

The sixth paragraph (lines 67-78) is primarily concerned with establishing a contrast between

- A) men and women.
- B) the spiritual world and the material world.
- C) bad men and good men.
- D) men and masculine traits.



**Questions 43-52 are based on the following passage and supplementary material.**

This passage is adapted from Geoffrey Giller, “Long a Mystery, How 500-Meter-High Undersea Waves Form Is Revealed.” ©2014 by Scientific American.

Some of the largest ocean waves in the world are nearly impossible to see. Unlike other large waves, these rollers, called internal waves, do not ride the ocean surface. Instead, they move underwater, undetectable without the use of satellite imagery or sophisticated monitoring equipment. Despite their hidden nature, internal waves are fundamental parts of ocean water dynamics, transferring heat to the ocean depths and bringing up cold water from below. And they can reach staggering heights—some as tall as skyscrapers.

Because these waves are involved in ocean mixing and thus the transfer of heat, understanding them is crucial to global climate modeling, says Tom Peacock, a researcher at the Massachusetts Institute of Technology. Most models fail to take internal waves into account. “If we want to have more and more accurate climate models, we have to be able to capture processes such as this,” Peacock says.

Peacock and his colleagues tried to do just that. Their study, published in November in *Geophysical Research Letters*, focused on internal waves generated in the Luzon Strait, which separates Taiwan and the Philippines. Internal waves in this region, thought to be some of the largest in the world, can reach about 500 meters high. “That’s the same height as the Freedom Tower that’s just been built in New York,” Peacock says.

Although scientists knew of this phenomenon in the South China Sea and beyond, they didn’t know exactly how internal waves formed. To find out, Peacock and a team of researchers from M.I.T. and Woods Hole Oceanographic Institution worked with France’s National Center for Scientific Research using a giant facility there called the Coriolis Platform. The rotating platform, about 15 meters (49.2 feet) in diameter, turns at variable speeds and can simulate Earth’s rotation. It also has walls, which means scientists can fill it with water and create accurate, large-scale simulations of various oceanographic scenarios.

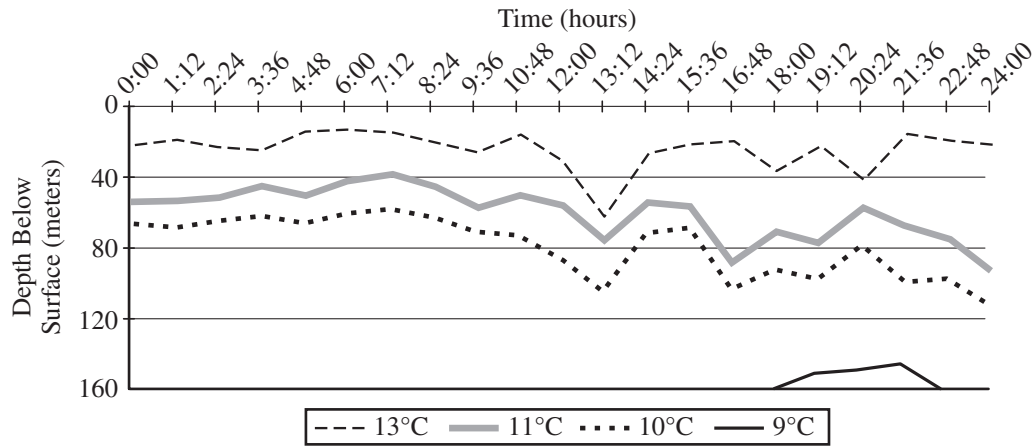
Peacock and his team built a carbon-fiber resin scale model of the Luzon Strait, including the islands and surrounding ocean floor topography. Then they filled the platform with water of varying salinity to replicate the different densities found at the strait, with denser, saltier water below and lighter, less briny water above. Small particles were added to the solution and illuminated with lights from below in order to track how the liquid moved. Finally, they re-created tides using two large plungers to see how the internal waves themselves formed.

The Luzon Strait’s underwater topography, with a distinct double-ridge shape, turns out to be responsible for generating the underwater waves. As the tide rises and falls and water moves through the strait, colder, denser water is pushed up over the ridges into warmer, less dense layers above it. This action results in bumps of colder water trailed by warmer water that generate an internal wave. As these waves move toward land, they become steeper—much the same way waves at the beach become taller before they hit the shore—until they break on a continental shelf.

The researchers were also able to devise a mathematical model that describes the movement and formation of these waves. Whereas the model is specific to the Luzon Strait, it can still help researchers understand how internal waves are generated in other places around the world. Eventually, this information will be incorporated into global climate models, making them more accurate. “It’s very clear, within the context of these [global climate] models, that internal waves play a role in driving ocean circulations,” Peacock says.



CHANGES IN DEPTH OF ISOTHERMS\*  
IN AN INTERNAL WAVE OVER A 24-HOUR PERIOD



\* Bands of water of constant temperatures

Adapted from Justin Small et al., "Internal Solitons in the Ocean: Prediction from SAR." ©1998 by Oceanography, Defence Evaluation and Research Agency.

43

The first paragraph serves mainly to

- A) explain how a scientific device is used.
- B) note a common misconception about an event.
- C) describe a natural phenomenon and address its importance.
- D) present a recent study and summarize its findings.

44

As used in line 19, "capture" is closest in meaning to

- A) control.
- B) record.
- C) secure.
- D) absorb.

45

According to Peacock, the ability to monitor internal waves is significant primarily because

- A) it will allow scientists to verify the maximum height of such waves.
- B) it will allow researchers to shift their focus to improving the quality of satellite images.
- C) the study of wave patterns will enable regions to predict and prevent coastal damage.
- D) the study of such waves will inform the development of key scientific models.

46

Which choice provides the best evidence for the answer to the previous question?

- A) Lines 1-2 ("Some . . . see")
- B) Lines 4-6 ("they . . . equipment")
- C) Lines 17-19 ("If . . . this")
- D) Lines 24-26 ("Internal . . . high")

47

As used in line 65, “devise” most nearly means

- A) create.
- B) solve.
- C) imagine.
- D) begin.

48

Based on information in the passage, it can reasonably be inferred that all internal waves

- A) reach approximately the same height even though the locations and depths of continental shelves vary.
- B) may be caused by similar factors but are influenced by the distinct topographies of different regions.
- C) can be traced to inconsistencies in the tidal patterns of deep ocean water located near islands.
- D) are generated by the movement of dense water over a relatively flat section of the ocean floor.

49

Which choice provides the best evidence for the answer to the previous question?

- A) Lines 29-31 (“Although . . . formed”)
- B) Lines 56-58 (“As the . . . it”)
- C) Lines 61-64 (“As these . . . shelf”)
- D) Lines 67-70 (“Whereas . . . world”)

50

In the graph, which isotherm displays an increase in depth below the surface during the period 19:12 to 20:24?

- A) 9°C
- B) 10°C
- C) 11°C
- D) 13°C

51

Which concept is supported by the passage and by the information in the graph?

- A) Internal waves cause water of varying salinity to mix.
- B) Internal waves push denser water above layers of less dense water.
- C) Internal waves push bands of cold water above bands of warmer water.
- D) Internal waves do not rise to break the ocean’s surface.

52

How does the graph support the author’s point that internal waves affect ocean water dynamics?

- A) It demonstrates that wave movement forces warmer water down to depths that typically are colder.
- B) It reveals the degree to which an internal wave affects the density of deep layers of cold water.
- C) It illustrates the change in surface temperature that takes place during an isolated series of deep waves.
- D) It shows that multiple waves rising near the surface of the ocean disrupt the flow of normal tides.

# STOP

**If you finish before time is called, you may check your work on this section only.**

**Do not turn to any other section.**

**No Test Material On This Page**

# Writing and Language Test

35 MINUTES, 44 QUESTIONS

Turn to Section 2 of your answer sheet to answer the questions in this section.

## DIRECTIONS

Each passage below is accompanied by a number of questions. For some questions, you will consider how the passage might be revised to improve the expression of ideas. For other questions, you will consider how the passage might be edited to correct errors in sentence structure, usage, or punctuation. A passage or a question may be accompanied by one or more graphics (such as a table or graph) that you will consider as you make revising and editing decisions.

Some questions will direct you to an underlined portion of a passage. Other questions will direct you to a location in a passage or ask you to think about the passage as a whole.

After reading each passage, choose the answer to each question that most effectively improves the quality of writing in the passage or that makes the passage conform to the conventions of standard written English. Many questions include a “NO CHANGE” option. Choose that option if you think the best choice is to leave the relevant portion of the passage as it is.

Questions 1-11 are based on the following passage.

### Librarians Help Navigate in the Digital Age

In recent years, public libraries in the United States have experienced **1** reducing in their operating funds due to cuts imposed at the federal, state, and local government levels. **2** However, library staffing has been cut by almost four percent since 2008, and the demand for librarians continues to decrease, even though half of public libraries report that they have an insufficient number of staff to meet their patrons’ needs. Employment in all job sectors in the United States is projected to grow by fourteen percent over the next

1

- A) NO CHANGE
- B) reductions
- C) deducting
- D) deducts

2

- A) NO CHANGE
- B) Consequently,
- C) Nevertheless,
- D) Previously,

decade, yet the expected growth rate for librarians is predicted to be only seven percent, or half of the overall rate. This trend, combined with the increasing accessibility of information via the Internet, **3** has led some to claim that librarianship is in decline as a profession. As public libraries adapt to rapid technological advances in information distribution, librarians' roles are actually expanding.

The share of library materials that is in nonprint formats **4** is increasing steadily; in 2010, at least 18.5 million e-books were available **5** for them to circulate. As a result, librarians must now be proficient curators of electronic information, compiling, **6** catalog, and updating these collections. But perhaps even more importantly, librarians function as first responders for their communities' computer needs. Since

3

- A) NO CHANGE
- B) have
- C) which have
- D) which has

4

At this point, the writer is considering adding the following information.

—e-books, audio and video materials, and online journals—

Should the writer make this addition here?

- A) Yes, because it provides specific examples of the materials discussed in the sentence.
- B) Yes, because it illustrates the reason for the increase mentioned later in the sentence.
- C) No, because it interrupts the flow of the sentence by supplying irrelevant information.
- D) No, because it weakens the focus of the passage by discussing a subject other than librarians.

5

- A) NO CHANGE
- B) to be circulated by them.
- C) for their circulating.
- D) for circulation.

6

- A) NO CHANGE
- B) librarians cataloging,
- C) to catalog,
- D) cataloging,

one of the fastest growing library services is public access computer use, there is great demand for computer instruction. **7** In fact, librarians' training now includes courses on research and Internet search methods. Many of whom teach classes in Internet navigation, database and software use, and digital information literacy. While these classes are particularly helpful to young students developing basic research skills, **8** but adult patrons can also benefit from librarian assistance in that they can acquire job-relevant computer skills. **9** Free to all who utilize their services, public libraries and librarians are especially valuable, because they offer free resources that may be difficult to find elsewhere, such as help with online job

7

Which choice most effectively combines the underlined sentences?

- A) In fact, librarians' training now includes courses on research and Internet search methods; many librarians teach classes in Internet navigation, database and software use, and digital information literacy is taught by them.
- B) In fact, many librarians, whose training now includes courses on research and Internet search methods, teach classes in Internet navigation, database and software use, and digital information literacy.
- C) Training now includes courses on research and Internet search methods; many librarians, in fact, are teaching classes in Internet navigation, database and software use, and digital information literacy.
- D) Including courses on research and Internet search methods in their training is, in fact, why many librarians teach classes in Internet navigation, database and software use, and digital information literacy.

8

- A) NO CHANGE
- B) and
- C) for
- D) DELETE the underlined portion.

9

Which choice most effectively sets up the examples given at the end of the sentence?

- A) NO CHANGE
- B) During periods of economic recession,
- C) Although their value cannot be measured,
- D) When it comes to the free services libraries provide,

searches as well as résumé and job material development. An overwhelming number of public libraries also report that they provide help with electronic government resources related to income taxes, **10** law troubles, and retirement programs.

In sum, the Internet does not replace the need for librarians, and librarians are hardly obsolete. **11** Like books, librarians have been around for a long time, but the Internet is extremely useful for many types of research.

10

- A) NO CHANGE
- B) legal issues,
- C) concerns related to law courts,
- D) matters for the law courts,

11

Which choice most clearly ends the passage with a restatement of the writer's primary claim?

- A) NO CHANGE
- B) Although their roles have diminished significantly, librarians will continue to be employed by public libraries for the foreseeable future.
- C) The growth of electronic information has led to a diversification of librarians' skills and services, positioning them as savvy resource specialists for patrons.
- D) However, given their extensive training and skills, librarians who have been displaced by budget cuts have many other possible avenues of employment.

Questions 12-22 are based on the following passage.

### Tiny Exhibit, Big Impact

— 1 —

The first time I visited the Art Institute of Chicago, I expected to be impressed by its famous large paintings.

**12** On one hand, I couldn't wait to view **13** painter, Georges Seurat's, 10-foot-wide *A Sunday Afternoon on the Island of La Grande Jatte* in its full size. It took me by surprise, then, when my favorite exhibit at the museum was one of **14** it's tiniest; the Thorne Miniature Rooms.

**12**

- A) NO CHANGE
- B) For instance,
- C) However,
- D) Similarly,

**13**

- A) NO CHANGE
- B) painter, Georges Seurat's
- C) painter Georges Seurat's,
- D) painter Georges Seurat's

**14**

- A) NO CHANGE
- B) its tiniest;
- C) its tiniest:
- D) it's tiniest,



— 2 —

Viewing the exhibit, I was amazed by the intricate details of some of the more ornately decorated rooms. I marveled at a replica of a salon (a formal living room) dating back to the reign of French king Louis XV.

**15** Built into the dark paneled walls are bookshelves stocked with leather-bound volumes. The couch and chairs, in keeping with the style of the time, are characterized by elegantly curved arms and **16** legs, they are covered in luxurious velvet. A dime-sized portrait of a French aristocratic woman hangs in a golden frame.

— 3 —

This exhibit showcases sixty-eight miniature rooms inserted into a wall at eye level. Each furnished room consists of three walls; the fourth wall is a glass pane through which museumgoers observe. The rooms and their furnishings were painstakingly created to scale at 1/12th their actual size, so that one inch in the exhibit correlates with one foot in real life. A couch, for example, is seven inches long, and **17** that is based on a seven-foot-long couch. Each room represents a distinctive style of European, American, or Asian interior design from the thirteenth to twentieth centuries.

**15**

At this point, the writer is considering adding the following sentence.

Some scholars argue that the excesses of King Louis XV's reign contributed significantly to the conditions that resulted in the French Revolution.

Should the writer make this addition here?

- A) Yes, because it provides historical context for the Thorne Miniature Rooms exhibit.
- B) Yes, because it explains why salons are often ornately decorated.
- C) No, because it interrupts the paragraph's description of the miniature salon.
- D) No, because it implies that the interior designer of the salon had political motivations.

**16**

- A) NO CHANGE
- B) legs, the couch and chairs
- C) legs and
- D) legs,

**17**

Which choice gives a second supporting example that is most similar to the example already in the sentence?

- A) NO CHANGE
- B) a tea cup is about a quarter of an inch.
- C) there are even tiny cushions on some.
- D) household items are also on this scale.

— 4 —

The plainer rooms are more sparsely **18** furnished. Their architectural features, furnishings, and decorations are just as true to the periods they represent. One of my favorite rooms in the whole exhibit, in fact, is an 1885 summer kitchen. The room is simple but spacious, with a small sink and counter along one wall, a cast-iron wood stove and some hanging pots and pans against another wall, and **19** a small table under a window of the third wall. Aside from a few simple wooden chairs placed near the edges of the room, the floor is open and obviously well worn.

18

Which choice most effectively combines the sentences at the underlined portion?

- A) furnished by their
- B) furnished, but their
- C) furnished: their
- D) furnished, whereas

19

Which choice most closely matches the stylistic pattern established earlier in the sentence?

- A) NO CHANGE
- B) a small table is under the third wall's window.
- C) the third wall has a window and small table.
- D) the third wall has a small table against it and a window.

— 5 —

As I walked through the exhibit, I overheard a **20** visitors' remark, "You know, that grandfather clock actually runs. Its glass door swings open, and the clock can be wound up." **21** Dotted with pin-sized knobs, another visitor noticed my fascination with a tiny writing desk and its drawers. "All of those little drawers pull out. And you see that hutch? Can you believe it has a secret compartment?" Given the exquisite craftsmanship and level of detail I'd already seen, I certainly could.

**Question 22** asks about the previous passage as a whole.

20

- A) NO CHANGE
- B) visitors remarking,
- C) visitor remarked,
- D) visitor remark,

21

- A) NO CHANGE
- B) Another visitor, dotted with pin-sized knobs, noticed my fascination with a tiny writing desk and its drawers.
- C) Another visitor dotted with pin-sized knobs noticed my fascination with a tiny writing desk and its drawers.
- D) Another visitor noticed my fascination with a tiny writing desk and its drawers, dotted with pin-sized knobs.

**Think about the previous passage as a whole as you answer question 22.**

22

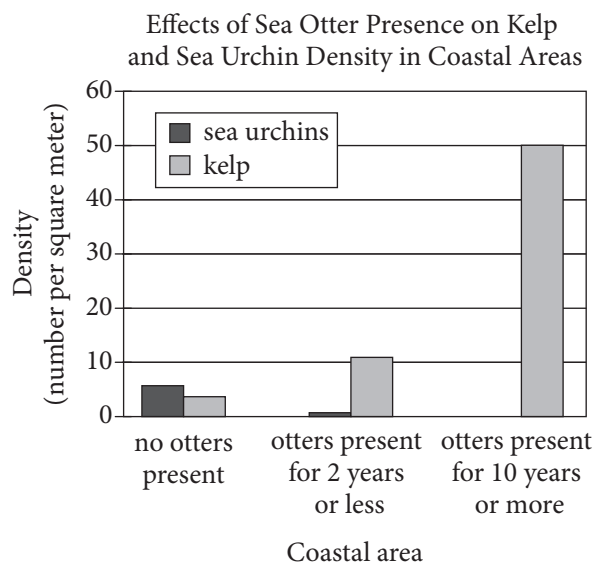
To make the passage most logical, paragraph 2 should be placed

- A) where it is now.
- B) after paragraph 3.
- C) after paragraph 4.
- D) after paragraph 5.

Questions 23-33 are based on the following passage and supplementary material.

### Environmentalist Otters

It has long been known that the sea otters **23** living along the West Coast of North America help keep kelp forests in their habitat healthy and vital. They do this by feeding on sea urchins and other herbivorous invertebrates that graze voraciously on kelp. With sea otters to keep the population of sea urchins in check, kelp forests can flourish. In fact, **24** two years or less of sea otters can completely eliminate sea urchins in a coastal area (see chart).



Adapted from David O. Duggins, "Kelp Beds and Sea Otters: An Experimental Approach." ©1980 by the Ecological Society of America.

Without sea otters present, **25** nevertheless, kelp forests run the danger of becoming barren stretches of coastal wasteland known as urchin barrens.

23

- A) NO CHANGE
- B) living along the West Coast of North America, they help
- C) that live along the West Coast of North America and help to
- D) that live along the West Coast of North America, where they help

24

Which choice offers an accurate interpretation of the data in the chart?

- A) NO CHANGE
- B) even two years or less of sea otter presence can reduce the sea urchin threat
- C) kelp density increases proportionally as sea urchin density increases
- D) even after sea otters were present for ten years or more, kelp density was still lower than sea urchin density

25

- A) NO CHANGE
- B) however,
- C) hence,
- D) likewise,

[1] What was less well-known, until recently at least, was how this relationship among sea otters, sea urchins, and kelp forests might help fight global warming. [2] The amount of carbon dioxide in the atmosphere has increased 40 percent **26**. [3] A recent study by two professors at the University of California, Santa Cruz, Chris Wilmers and James Estes, **27** suggests, that kelp forests protected by sea otters can absorb as much as twelve times the amount of carbon dioxide from the atmosphere as those where sea urchins are allowed to **28** devour the kelp. [4] Like **29** their terrestrial plant cousins, kelp removes carbon dioxide from the atmosphere, turning it into sugar fuel through photosynthesis, and releases oxygen back into the air.

26

At this point, the writer is considering adding the following information.

since the start of the Industrial Revolution,  
resulting in a rise in global temperatures

Should the writer make this addition here?

- A) Yes, because it establishes the relationship between the level of carbon dioxide in the atmosphere and global warming.
- B) Yes, because it explains the key role sea otters, sea urchins, and kelp forests play in combating global warming.
- C) No, because it contradicts the claim made in the previous paragraph that sea otters help keep kelp forests healthy.
- D) No, because it mentions the Industrial Revolution, blurring the focus of the paragraph.

27

- A) NO CHANGE
- B) suggests—that
- C) suggests, “that
- D) suggests that

28

- A) NO CHANGE
- B) dispatch
- C) overindulge on
- D) dispose of

29

- A) NO CHANGE
- B) they’re
- C) its
- D) it’s

[5] Scientists knew this but did not recognize **30** how large a role they played in helping kelp forests to significantly decrease the amount of carbon dioxide in the atmosphere. [6] Far from making no difference to the ecosystem, the presence of otters was found to increase the carbon storage of kelp forests by 4.4 to 8.7 megatons annually, offsetting the amount of carbon dioxide emitted by three million to six million passenger cars each year. **31**

Wilmers and Estes caution, however, that **32** having more otters will not automatically solve the problem of higher levels of carbon dioxide in the air. But they suggest that the presence of otters provides a good model of how carbon can be sequestered, **33** or removed; from the atmosphere through the management of animal populations. If ecologists can better understand what kinds of impacts animals might have on the environment, Wilmers contends, “there might be opportunities for win-win conservation scenarios, whereby animal species are protected or enhanced, and carbon gets sequestered.”

**30**

- A) NO CHANGE
- B) how large a role that it played
- C) how large a role sea otters played
- D) that they played such a large role

**31**

Where is the most logical place in this paragraph to add the following sentence?

What Wilmers and Estes discovered in their study, therefore, surprised them.

- A) After sentence 1
- B) After sentence 3
- C) After sentence 4
- D) After sentence 5

**32**

- A) NO CHANGE
- B) increasing the otter population
- C) the otters multiplying
- D) having more otters than other locations

**33**

- A) NO CHANGE
- B) or removed from,
- C) or, removed from,
- D) or removed, from

Questions 34-44 are based on the following passage.

### A Quick Fix in a Throwaway Culture

Planned obsolescence, a practice **34** at which products are designed to have a limited period of **35** usefulness, has been a cornerstone of manufacturing strategy for the past 80 years. This approach increases sales, but it also stands in **36** austere contrast to a time when goods were produced to be durable. Planned obsolescence wastes materials as well as energy in making and shipping new products. It also reinforces the belief that it is easier to replace goods than to mend them, as repair shops are rare and **37** repair methods are often specialized. In 2009, an enterprising movement, the Repair Café, challenged this widely accepted belief.

34

- A) NO CHANGE
- B) from which
- C) so that
- D) whereby

35

- A) NO CHANGE
- B) usefulness—
- C) usefulness;
- D) usefulness

36

- A) NO CHANGE
- B) egregious
- C) unmitigated
- D) stark

37

Which choice provides information that best supports the claim made by this sentence?

- A) NO CHANGE
- B) obsolete goods can become collectible items.
- C) no one knows whether something will fall into disrepair again.
- D) new designs often have “bugs” that must be worked out.

[1] More like a **38** fair then an actual café, the first Repair Café took place in Amsterdam, the Netherlands. [2] It was the brainchild of former journalist Martine Postma, **39** wanting to take a practical stand in a throwaway culture. [3] Her goals were **40** straightforward, however: reduce waste, maintain and perpetuate knowledge and skills, and strengthen community. [4] Participants bring all manner of damaged articles—clothing, appliances, furniture, and more—to be repaired by a staff of volunteer specialists including tailors, electricians, and carpenters. [5] Since the inaugural Repair Café, others have been hosted in theater foyers, community centers, hotels, and auditoriums. [6] While **41** they await for service, patrons can enjoy coffee and snacks and mingle with their neighbors in need. **42**

38

- A) NO CHANGE
- B) fair than
- C) fare than
- D) fair, then

39

- A) NO CHANGE
- B) whom wants
- C) who wanted
- D) she wanted

40

- A) NO CHANGE
- B) straightforward, therefore:
- C) straightforward, nonetheless:
- D) straightforward:

41

- A) NO CHANGE
- B) awaiting
- C) they waited
- D) waiting

42

To make this paragraph most logical, sentence 5 should be placed

- A) where it is now.
- B) before sentence 1.
- C) after sentence 3.
- D) after sentence 6.



Though only about 3 percent of the Netherlands' municipal waste ends up in landfills, Repair Cafés still raise awareness about what may otherwise be mindless acts of waste by providing a venue for people to share and learn valuable skills that are in danger of being lost. **43** It is easy to classify old but fixable items as “junk” in an era that places great emphasis on the next big thing. In helping people consider how the goods they use on a daily basis work and are made, Repair Cafés restore a sense of relationship between human beings and material goods.

Though the concept remained a local trend at first, international Repair Cafés, all affiliated with the Dutch Repair Café via its website, have since arisen in France, Germany, South Africa, the United States, and other countries **44** on top of that. The original provides a central source for start-up tips and tools, as well as marketing advice to new Repair Cafés. As a result, the Repair Café has become a global network united by common ideals. Ironically, innovators are now looking back to old ways of doing things and applying them in today's cities in an effort to transform the way people relate to and think about the goods they consume.

43

At this point, the writer is considering adding the following sentence.

As the number of corporate and service-based jobs has increased, the need for people who work with their hands has diminished.

Should the writer make this addition here?

- A) Yes, because it provides an example of specific repair skills being lost.
- B) Yes, because it elaborates on the statistic about the Netherlands' municipal waste.
- C) No, because it blurs the paragraph's focus by introducing a topic that is not further explained.
- D) No, because it contradicts the claims made in the rest of the paragraph.

44

- A) NO CHANGE
- B) in addition.
- C) likewise.
- D) DELETE the underlined portion, and end the sentence with a period.

# STOP

**If you finish before time is called, you may check your work on this section only.**

**Do not turn to any other section.**



# Math Test – No Calculator

25 MINUTES, 20 QUESTIONS

Turn to Section 3 of your answer sheet to answer the questions in this section.

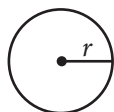
## DIRECTIONS

For questions 1-15, solve each problem, choose the best answer from the choices provided, and fill in the corresponding circle on your answer sheet. For questions 16-20, solve the problem and enter your answer in the grid on the answer sheet. Please refer to the directions before question 16 on how to enter your answers in the grid. You may use any available space in your test booklet for scratch work.

## NOTES

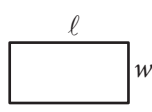
1. The use of a calculator **is not permitted**.
2. All variables and expressions used represent real numbers unless otherwise indicated.
3. Figures provided in this test are drawn to scale unless otherwise indicated.
4. All figures lie in a plane unless otherwise indicated.
5. Unless otherwise indicated, the domain of a given function  $f$  is the set of all real numbers  $x$  for which  $f(x)$  is a real number.

## REFERENCE

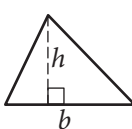


$$A = \pi r^2$$

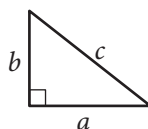
$$C = 2\pi r$$



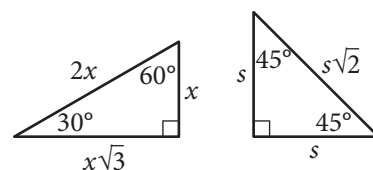
$$A = \ell w$$



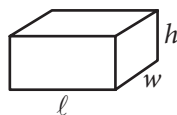
$$A = \frac{1}{2}bh$$



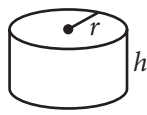
$$c^2 = a^2 + b^2$$



Special Right Triangles



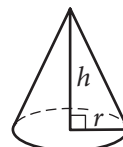
$$V = \ell wh$$



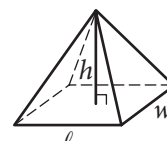
$$V = \pi r^2 h$$



$$V = \frac{4}{3}\pi r^3$$



$$V = \frac{1}{3}\pi r^2 h$$



$$V = \frac{1}{3}\ell wh$$

The number of degrees of arc in a circle is 360.

The number of radians of arc in a circle is  $2\pi$ .

The sum of the measures in degrees of the angles of a triangle is 180.



1

If  $5x + 6 = 10$ , what is the value of  $10x + 3$  ?

- A) 4
- B) 9
- C) 11
- D) 20

2

$$\begin{aligned}x + y &= 0 \\ 3x - 2y &= 10\end{aligned}$$

Which of the following ordered pairs  $(x, y)$  satisfies the system of equations above?

- A)  $(3, -2)$
- B)  $(2, -2)$
- C)  $(-2, 2)$
- D)  $(-2, -2)$

3

A landscaping company estimates the price of a job, in dollars, using the expression  $60 + 12nh$ , where  $n$  is the number of landscapers who will be working and  $h$  is the total number of hours the job will take using  $n$  landscapers. Which of the following is the best interpretation of the number 12 in the expression?

- A) The company charges \$12 per hour for each landscaper.
- B) A minimum of 12 landscapers will work on each job.
- C) The price of every job increases by \$12 every hour.
- D) Each landscaper works 12 hours a day.

4

$$9a^4 + 12a^2b^2 + 4b^4$$

Which of the following is equivalent to the expression shown above?

- A)  $(3a^2 + 2b^2)^2$
- B)  $(3a + 2b)^4$
- C)  $(9a^2 + 4b^2)^2$
- D)  $(9a + 4b)^4$



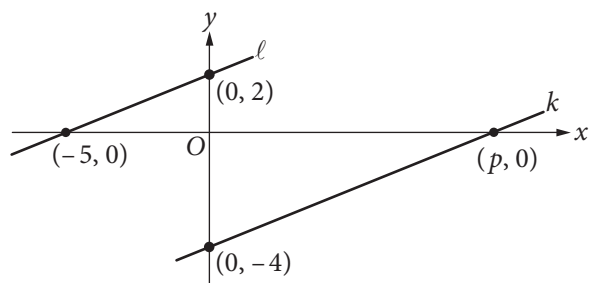
5

$$\sqrt{2k^2 + 17} - x = 0$$

If  $k > 0$  and  $x = 7$  in the equation above, what is the value of  $k$ ?

- A) 2
- B) 3
- C) 4
- D) 5

6



In the  $xy$ -plane above, line  $\ell$  is parallel to line  $k$ . What is the value of  $p$ ?

- A) 4
- B) 5
- C) 8
- D) 10

7

If  $\frac{x^{a^2}}{x^{b^2}} = x^{16}$ ,  $x > 1$ , and  $a + b = 2$ , what is the value

of  $a - b$ ?

- A) 8
- B) 14
- C) 16
- D) 18

8

$$nA = 360$$

The measure  $A$ , in degrees, of an exterior angle of a regular polygon is related to the number of sides,  $n$ , of the polygon by the formula above. If the measure of an exterior angle of a regular polygon is greater than  $50^\circ$ , what is the greatest number of sides it can have?

- A) 5
- B) 6
- C) 7
- D) 8



9

The graph of a line in the  $xy$ -plane has slope 2 and contains the point  $(1, 8)$ . The graph of a second line passes through the points  $(1, 2)$  and  $(2, 1)$ . If the two lines intersect at the point  $(a, b)$ , what is the value of  $a + b$  ?

- A) 4
- B) 3
- C) -1
- D) -4

10

Which of the following equations has a graph in the  $xy$ -plane for which  $y$  is always greater than or equal to  $-1$  ?

- A)  $y = |x| - 2$
- B)  $y = x^2 - 2$
- C)  $y = (x - 2)^2$
- D)  $y = x^3 - 2$

11

Which of the following complex numbers is equivalent to  $\frac{3 - 5i}{8 + 2i}$  ? (Note:  $i = \sqrt{-1}$ )

- A)  $\frac{3}{8} - \frac{5i}{2}$
- B)  $\frac{3}{8} + \frac{5i}{2}$
- C)  $\frac{7}{34} - \frac{23i}{34}$
- D)  $\frac{7}{34} + \frac{23i}{34}$

12

$$R = \frac{F}{N + F}$$

A website uses the formula above to calculate a seller's rating,  $R$ , based on the number of favorable reviews,  $F$ , and unfavorable reviews,  $N$ . Which of the following expresses the number of favorable reviews in terms of the other variables?

- A)  $F = \frac{RN}{R - 1}$
- B)  $F = \frac{RN}{1 - R}$
- C)  $F = \frac{N}{1 - R}$
- D)  $F = \frac{N}{R - 1}$



13

What is the sum of all values of  $m$  that satisfy  $2m^2 - 16m + 8 = 0$  ?

- A)  $-8$
- B)  $-4\sqrt{3}$
- C)  $4\sqrt{3}$
- D)  $8$

14

A radioactive substance decays at an annual rate of 13 percent. If the initial amount of the substance is 325 grams, which of the following functions  $f$  models the remaining amount of the substance, in grams,  $t$  years later?

- A)  $f(t) = 325(0.87)^t$
- B)  $f(t) = 325(0.13)^t$
- C)  $f(t) = 0.87(325)^t$
- D)  $f(t) = 0.13(325)^t$

15

The expression  $\frac{5x-2}{x+3}$  is equivalent to which of the following?

- A)  $\frac{5-2}{3}$
- B)  $5 - \frac{2}{3}$
- C)  $5 - \frac{2}{x+3}$
- D)  $5 - \frac{17}{x+3}$

**DIRECTIONS**

For questions 16–20, solve the problem and enter your answer in the grid, as described below, on the answer sheet.

- Although not required, it is suggested that you write your answer in the boxes at the top of the columns to help you fill in the circles accurately. You will receive credit only if the circles are filled in correctly.
- Mark no more than one circle in any column.
- No question has a negative answer.
- Some problems may have more than one correct answer. In such cases, grid only one answer.
- Mixed numbers** such as  $3\frac{1}{2}$  must be gridded as 3.5 or  $7/2$ . (If  $\begin{array}{|c|c|c|c|} \hline 3 & 1 & / & 2 \\ \hline \bullet & \bullet & \bullet & \bullet \\ \hline \end{array}$  is entered into the grid, it will be interpreted as  $\frac{31}{2}$ , not  $3\frac{1}{2}$ .)
- Decimal answers:** If you obtain a decimal answer with more digits than the grid can accommodate, it may be either rounded or truncated, but it must fill the entire grid.

Answer:  $\frac{7}{12}$

Write answer in boxes. →

← Fraction line

Grid in result.

7	/	1	2
<input type="radio"/>	<input type="radio"/>	<input type="radio"/>	<input type="radio"/>
<input type="radio"/>	<input type="radio"/>	<input type="radio"/>	<input type="radio"/>
1	1	1	1
2	2	2	2
3	3	3	3
4	4	4	4
5	5	5	5
6	6	6	6
7	7	7	7
8	8	8	8
9	9	9	9

Answer: 2.5

← Decimal point

2	.	5
<input type="radio"/>	<input type="radio"/>	<input type="radio"/>
<input type="radio"/>	<input type="radio"/>	<input type="radio"/>
0	0	0
1	1	1
2	2	2
3	3	3
4	4	4
5	5	5
6	6	6
7	7	7
8	8	8
9	9	9

Acceptable ways to grid  $\frac{2}{3}$  are:

2	/	3
<input type="radio"/>	<input type="radio"/>	<input type="radio"/>
<input type="radio"/>	<input type="radio"/>	<input type="radio"/>
0	0	0
1	1	1
2	2	2
3	3	3
4	4	4
5	5	5
6	6	6
7	7	7
8	8	8

.	6	6	6
<input type="radio"/>	<input type="radio"/>	<input type="radio"/>	<input type="radio"/>
<input type="radio"/>	<input type="radio"/>	<input type="radio"/>	<input type="radio"/>
0	0	0	0
1	1	1	1
2	2	2	2
3	3	3	3
4	4	4	4
5	5	5	5
6	6	6	6
7	7	7	7
8	8	8	8

.	6	6	7
<input type="radio"/>	<input type="radio"/>	<input type="radio"/>	<input type="radio"/>
<input type="radio"/>	<input type="radio"/>	<input type="radio"/>	<input type="radio"/>
0	0	0	0
1	1	1	1
2	2	2	2
3	3	3	3
4	4	4	4
5	5	5	5
6	6	6	6
7	7	7	7
8	8	8	8

Answer: 201 – either position is correct

2	0	1
<input type="radio"/>	<input type="radio"/>	<input type="radio"/>
<input type="radio"/>	<input type="radio"/>	<input type="radio"/>
0	0	0
1	1	1
2	2	2
3	3	3

2	0	1
<input type="radio"/>	<input type="radio"/>	<input type="radio"/>
<input type="radio"/>	<input type="radio"/>	<input type="radio"/>
0	0	0
1	1	1
2	2	2
3	3	3

**NOTE:** You may start your answers in any column, space permitting. Columns you don't need to use should be left blank.



16

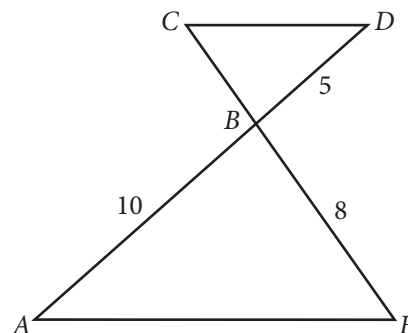
The sales manager of a company awarded a total of \$3000 in bonuses to the most productive salespeople. The bonuses were awarded in amounts of \$250 or \$750. If at least one \$250 bonus and at least one \$750 bonus were awarded, what is one possible number of \$250 bonuses awarded?

17

$$2x(3x + 5) + 3(3x + 5) = ax^2 + bx + c$$

In the equation above,  $a$ ,  $b$ , and  $c$  are constants. If the equation is true for all values of  $x$ , what is the value of  $b$ ?

18

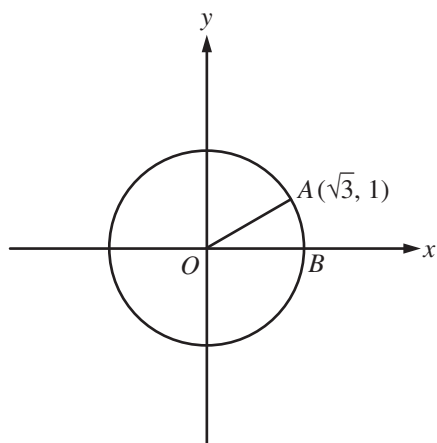


In the figure above,  $\overline{AC} \parallel \overline{DE}$  and segment  $AD$  intersects segment  $CE$  at  $B$ . What is the length of segment  $CE$ ?





19



In the  $xy$ -plane above,  $O$  is the center of the circle, and the measure of  $\angle AOB$  is  $\frac{\pi}{a}$  radians. What is the value of  $a$ ?

20

$$ax + by = 12$$

$$2x + 8y = 60$$

In the system of equations above,  $a$  and  $b$  are constants. If the system has infinitely many solutions, what is the value of  $\frac{a}{b}$ ?

**STOP**

**If you finish before time is called, you may check your work on this section only.  
Do not turn to any other section.**



# Math Test – Calculator

55 MINUTES, 38 QUESTIONS

Turn to Section 4 of your answer sheet to answer the questions in this section.

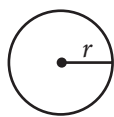
## DIRECTIONS

For questions 1-30, solve each problem, choose the best answer from the choices provided, and fill in the corresponding circle on your answer sheet. For questions 31-38, solve the problem and enter your answer in the grid on the answer sheet. Please refer to the directions before question 31 on how to enter your answers in the grid. You may use any available space in your test booklet for scratch work.

## NOTES

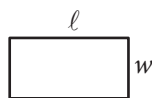
1. The use of a calculator **is permitted**.
2. All variables and expressions used represent real numbers unless otherwise indicated.
3. Figures provided in this test are drawn to scale unless otherwise indicated.
4. All figures lie in a plane unless otherwise indicated.
5. Unless otherwise indicated, the domain of a given function  $f$  is the set of all real numbers  $x$  for which  $f(x)$  is a real number.

## REFERENCE

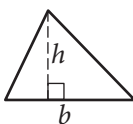


$$A = \pi r^2$$

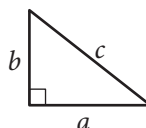
$$C = 2\pi r$$



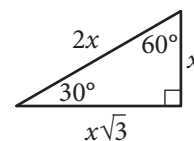
$$A = \ell w$$



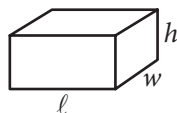
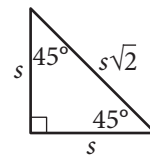
$$A = \frac{1}{2}bh$$



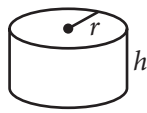
$$c^2 = a^2 + b^2$$



Special Right Triangles



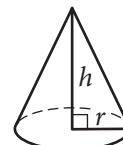
$$V = \ell wh$$



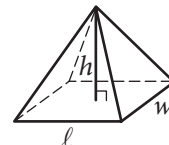
$$V = \pi r^2 h$$



$$V = \frac{4}{3}\pi r^3$$



$$V = \frac{1}{3}\pi r^2 h$$



$$V = \frac{1}{3}\ell wh$$

The number of degrees of arc in a circle is 360.

The number of radians of arc in a circle is  $2\pi$ .

The sum of the measures in degrees of the angles of a triangle is 180.



1

A musician has a new song available for downloading or streaming. The musician earns \$0.09 each time the song is downloaded and \$0.002 each time the song is streamed. Which of the following expressions represents the amount, in dollars, that the musician earns if the song is downloaded  $d$  times and streamed  $s$  times?

- A)  $0.002d + 0.09s$
- B)  $0.002d - 0.09s$
- C)  $0.09d + 0.002s$
- D)  $0.09d - 0.002s$

2

A quality control manager at a factory selects 7 lightbulbs at random for inspection out of every 400 lightbulbs produced. At this rate, how many lightbulbs will be inspected if the factory produces 20,000 lightbulbs?

- A) 300
- B) 350
- C) 400
- D) 450

3

$$\ell = 24 + 3.5m$$

One end of a spring is attached to a ceiling. When an object of mass  $m$  kilograms is attached to the other end of the spring, the spring stretches to a length of  $\ell$  centimeters as shown in the equation above. What is  $m$  when  $\ell$  is 73?

- A) 14
- B) 27.7
- C) 73
- D) 279.5



Questions 4 and 5 refer to the following information.

The amount of money a performer earns is directly proportional to the number of people attending the performance. The performer earns \$120 at a performance where 8 people attend.

4

How much money will the performer earn when 20 people attend a performance?

- A) \$960
- B) \$480
- C) \$300
- D) \$240

5

The performer uses 43% of the money earned to pay the costs involved in putting on each performance. The rest of the money earned is the performer's profit. What is the profit the performer makes at a performance where 8 people attend?

- A) \$51.60
- B) \$57.00
- C) \$68.40
- D) \$77.00

6

When 4 times the number  $x$  is added to 12, the result is 8. What number results when 2 times  $x$  is added to 7?

- A)  $-1$
- B)  $5$
- C)  $8$
- D)  $9$

7

$$y = x^2 - 6x + 8$$

The equation above represents a parabola in the  $xy$ -plane. Which of the following equivalent forms of the equation displays the  $x$ -intercepts of the parabola as constants or coefficients?

- A)  $y - 8 = x^2 - 6x$
- B)  $y + 1 = (x - 3)^2$
- C)  $y = x(x - 6) + 8$
- D)  $y = (x - 2)(x - 4)$



8

In a video game, each player starts the game with  $k$  points and loses 2 points each time a task is not completed. If a player who gains no additional points and fails to complete 100 tasks has a score of 200 points, what is the value of  $k$ ?

- A) 0
- B) 150
- C) 250
- D) 400

9

A worker uses a forklift to move boxes that weigh either 40 pounds or 65 pounds each. Let  $x$  be the number of 40-pound boxes and  $y$  be the number of 65-pound boxes. The forklift can carry up to either 45 boxes or a weight of 2,400 pounds. Which of the following systems of inequalities represents this relationship?

- A)  $\begin{cases} 40x + 65y \leq 2,400 \\ x + y \leq 45 \end{cases}$
- B)  $\begin{cases} \frac{x}{40} + \frac{y}{65} \leq 2,400 \\ x + y \leq 45 \end{cases}$
- C)  $\begin{cases} 40x + 65y \leq 45 \\ x + y \leq 2,400 \end{cases}$
- D)  $\begin{cases} x + y \leq 2,400 \\ 40x + 65y \leq 2,400 \end{cases}$

10

A function  $f$  satisfies  $f(2) = 3$  and  $f(3) = 5$ . A function  $g$  satisfies  $g(3) = 2$  and  $g(5) = 6$ . What is the value of  $f(g(3))$ ?

- A) 2
- B) 3
- C) 5
- D) 6

11

Number of hours Tony plans to read the novel per day	3
Number of parts in the novel	8
Number of chapters in the novel	239
Number of words Tony reads per minute	250
Number of pages in the novel	1,078
Number of words in the novel	349,168

Tony is planning to read a novel. The table above shows information about the novel, Tony's reading speed, and the amount of time he plans to spend reading the novel each day. If Tony reads at the rates given in the table, which of the following is closest to the number of days it would take Tony to read the entire novel?

- A) 6
- B) 8
- C) 23
- D) 324



12

On January 1, 2000, there were 175,000 tons of trash in a landfill that had a capacity of 325,000 tons. Each year since then, the amount of trash in the landfill increased by 7,500 tons. If  $y$  represents the time, in years, after January 1, 2000, which of the following inequalities describes the set of years where the landfill is at or above capacity?

- A)  $325,000 - 7,500 \leq y$
- B)  $325,000 \leq 7,500y$
- C)  $150,000 \geq 7,500y$
- D)  $175,000 + 7,500y \geq 325,000$

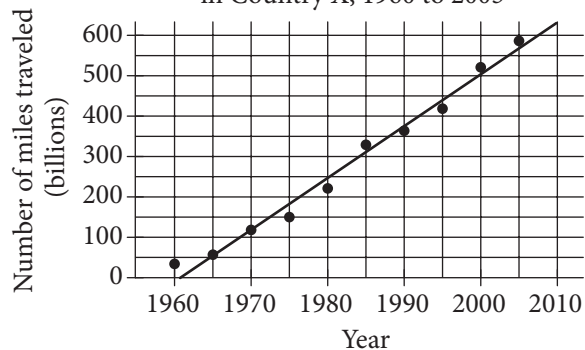
13

A researcher conducted a survey to determine whether people in a certain large town prefer watching sports on television to attending the sporting event. The researcher asked 117 people who visited a local restaurant on a Saturday, and 7 people refused to respond. Which of the following factors makes it least likely that a reliable conclusion can be drawn about the sports-watching preferences of all people in the town?

- A) Sample size
- B) Population size
- C) The number of people who refused to respond
- D) Where the survey was given

14

Miles Traveled by Air Passengers  
in Country X, 1960 to 2005



According to the line of best fit in the scatterplot above, which of the following best approximates the year in which the number of miles traveled by air passengers in Country X was estimated to be 550 billion?

- A) 1997
- B) 2000
- C) 2003
- D) 2008



15

The distance traveled by Earth in one orbit around the Sun is about 580,000,000 miles. Earth makes one complete orbit around the Sun in one year. Of the following, which is closest to the average speed of Earth, in miles per hour, as it orbits the Sun?

- A) 66,000
- B) 93,000
- C) 210,000
- D) 420,000

16

Results on the Bar Exam of Law School Graduates

	Passed bar exam	Did not pass bar exam
Took review course	18	82
Did not take review course	7	93

The table above summarizes the results of 200 law school graduates who took the bar exam. If one of the surveyed graduates who passed the bar exam is chosen at random for an interview, what is the probability that the person chosen did not take the review course?

- A)  $\frac{18}{25}$
- B)  $\frac{7}{25}$
- C)  $\frac{25}{200}$
- D)  $\frac{7}{200}$

17

The atomic weight of an unknown element, in atomic mass units (amu), is approximately 20% less than that of calcium. The atomic weight of calcium is 40 amu. Which of the following best approximates the atomic weight, in amu, of the unknown element?

- A) 8
- B) 20
- C) 32
- D) 48

18

A survey was taken of the value of homes in a county, and it was found that the mean home value was \$165,000 and the median home value was \$125,000. Which of the following situations could explain the difference between the mean and median home values in the county?

- A) The homes have values that are close to each other.
- B) There are a few homes that are valued much less than the rest.
- C) There are a few homes that are valued much more than the rest.
- D) Many of the homes have values between \$125,000 and \$165,000.



Questions 19 and 20 refer to the following information.

A sociologist chose 300 students at random from each of two schools and asked each student how many siblings he or she has. The results are shown in the table below.

Students' Sibling Survey

Number of siblings	Lincoln School	Washington School
0	120	140
1	80	110
2	60	30
3	30	10
4	10	10

There are a total of 2,400 students at Lincoln School and 3,300 students at Washington School.

19

What is the median number of siblings for all the students surveyed?

- A) 0
- B) 1
- C) 2
- D) 3

20

Based on the survey data, which of the following most accurately compares the expected total number of students with 4 siblings at the two schools?

- A) The total number of students with 4 siblings is expected to be equal at the two schools.
- B) The total number of students with 4 siblings at Lincoln School is expected to be 30 more than at Washington School.
- C) The total number of students with 4 siblings at Washington School is expected to be 30 more than at Lincoln School.
- D) The total number of students with 4 siblings at Washington School is expected to be 900 more than at Lincoln School.

21

A project manager estimates that a project will take  $x$  hours to complete, where  $x > 100$ . The goal is for the estimate to be within 10 hours of the time it will actually take to complete the project. If the manager meets the goal and it takes  $y$  hours to complete the project, which of the following inequalities represents the relationship between the estimated time and the actual completion time?

- A)  $x + y < 10$
- B)  $y > x + 10$
- C)  $y < x - 10$
- D)  $-10 < y - x < 10$





Questions 22 and 23 refer to the following information.

$$I = \frac{P}{4\pi r^2}$$

At a large distance  $r$  from a radio antenna, the intensity of the radio signal  $I$  is related to the power of the signal  $P$  by the formula above.

22

Which of the following expresses the square of the distance from the radio antenna in terms of the intensity of the radio signal and the power of the signal?

- A)  $r^2 = \frac{IP}{4\pi}$
- B)  $r^2 = \frac{P}{4\pi I}$
- C)  $r^2 = \frac{4\pi I}{P}$
- D)  $r^2 = \frac{I}{4\pi P}$

23

For the same signal emitted by a radio antenna, Observer A measures its intensity to be 16 times the intensity measured by Observer B. The distance of Observer A from the radio antenna is what fraction of the distance of Observer B from the radio antenna?

- A)  $\frac{1}{4}$
- B)  $\frac{1}{16}$
- C)  $\frac{1}{64}$
- D)  $\frac{1}{256}$

24

$$x^2 + y^2 + 4x - 2y = -1$$

The equation of a circle in the  $xy$ -plane is shown above. What is the radius of the circle?

- A) 2
- B) 3
- C) 4
- D) 9

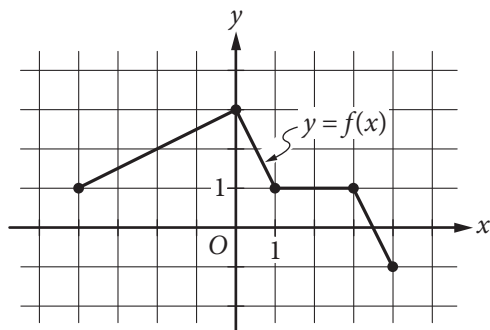


25

The graph of the linear function  $f$  has intercepts at  $(a, 0)$  and  $(0, b)$  in the  $xy$ -plane. If  $a + b = 0$  and  $a \neq b$ , which of the following is true about the slope of the graph of  $f$ ?

- A) It is positive.
- B) It is negative.
- C) It equals zero.
- D) It is undefined.

26

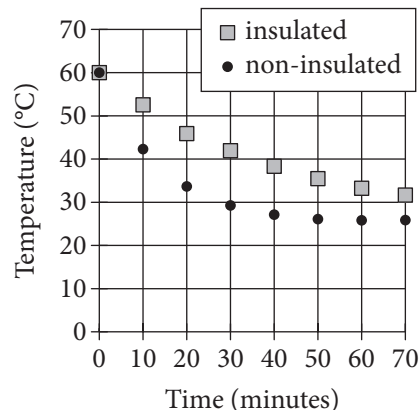


The complete graph of the function  $f$  is shown in the  $xy$ -plane above. Which of the following are equal to 1?

- I.  $f(-4)$
- II.  $f\left(\frac{3}{2}\right)$
- III.  $f(3)$

- A) III only
- B) I and III only
- C) II and III only
- D) I, II, and III

27

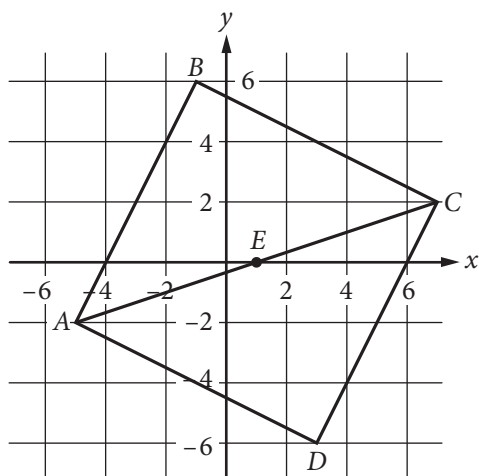


Two samples of water of equal mass are heated to 60 degrees Celsius ( $^{\circ}\text{C}$ ). One sample is poured into an insulated container, and the other sample is poured into a non-insulated container. The samples are then left for 70 minutes to cool in a room having a temperature of  $25^{\circ}\text{C}$ . The graph above shows the temperature of each sample at 10-minute intervals. Which of the following statements correctly compares the average rates at which the temperatures of the two samples change?

- A) In every 10-minute interval, the magnitude of the rate of change of temperature of the insulated sample is greater than that of the non-insulated sample.
- B) In every 10-minute interval, the magnitude of the rate of change of temperature of the non-insulated sample is greater than that of the insulated sample.
- C) In the intervals from 0 to 10 minutes and from 10 to 20 minutes, the rates of change of temperature of the insulated sample are of greater magnitude, whereas in the intervals from 40 to 50 minutes and from 50 to 60 minutes, the rates of change of temperature of the non-insulated sample are of greater magnitude.
- D) In the intervals from 0 to 10 minutes and from 10 to 20 minutes, the rates of change of temperature of the non-insulated sample are of greater magnitude, whereas in the intervals from 40 to 50 minutes and from 50 to 60 minutes, the rates of change of temperature of the insulated sample are of greater magnitude.



28



In the  $xy$ -plane above,  $ABCD$  is a square and point  $E$  is the center of the square. The coordinates of points  $C$  and  $E$  are  $(7, 2)$  and  $(1, 0)$ , respectively. Which of the following is an equation of the line that passes through points  $B$  and  $D$ ?

- A)  $y = -3x - 1$
- B)  $y = -3(x - 1)$
- C)  $y = -\frac{1}{3}x + 4$
- D)  $y = -\frac{1}{3}x - 1$

29

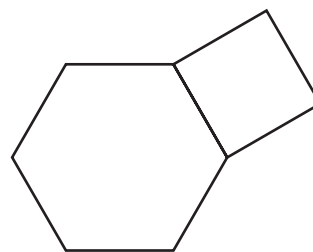
$$y = 3$$

$$y = ax^2 + b$$

In the system of equations above,  $a$  and  $b$  are constants. For which of the following values of  $a$  and  $b$  does the system of equations have exactly two real solutions?

- A)  $a = -2, b = 2$
- B)  $a = -2, b = 4$
- C)  $a = 2, b = 4$
- D)  $a = 4, b = 3$

30



The figure above shows a regular hexagon with sides of length  $a$  and a square with sides of length  $a$ . If the area of the hexagon is  $384\sqrt{3}$  square inches, what is the area, in square inches, of the square?

- A) 256
- B) 192
- C)  $64\sqrt{3}$
- D)  $16\sqrt{3}$


**DIRECTIONS**

For questions 31-38, solve the problem and enter your answer in the grid, as described below, on the answer sheet.

- Although not required, it is suggested that you write your answer in the boxes at the top of the columns to help you fill in the circles accurately. You will receive credit only if the circles are filled in correctly.
- Mark no more than one circle in any column.
- No question has a negative answer.
- Some problems may have more than one correct answer. In such cases, grid only one answer.
- Mixed numbers** such as  $3\frac{1}{2}$  must be gridded as 3.5 or  $7/2$ . (If  $\begin{array}{|c|c|c|c|} \hline 3 & 1 & / & 2 \\ \hline \bullet & \bullet & \bullet & \bullet \\ \hline \end{array}$  is entered into the grid, it will be interpreted as  $\frac{31}{2}$ , not  $3\frac{1}{2}$ .)
- Decimal answers:** If you obtain a decimal answer with more digits than the grid can accommodate, it may be either rounded or truncated, but it must fill the entire grid.

Write answer in boxes. →

Answer:  $\frac{7}{12}$

← Fraction line

Grid in result.

7	/	1	2
•	•	•	•
0	0	0	0
1	1	•	1
2	2	2	•
3	3	3	3
4	4	4	4
5	5	5	5
6	6	6	6
•	7	7	7
8	8	8	8
9	9	9	9

Answer: 2.5

← Decimal point

	2	.	5
•	•	•	•
0	0	0	0
1	1	1	1
2	•	2	2
3	3	3	3
4	4	4	4
5	5	5	•
6	6	6	6
7	7	7	7
8	8	8	8
9	9	9	9

Acceptable ways to grid  $\frac{2}{3}$  are:

	2	/	3
•	•	•	•
0	0	0	0
1	1	1	1
2	•	2	2
3	3	3	•
4	4	4	4
5	5	5	5
6	6	6	6
7	7	7	7
8	8	8	8

.	6	6	6
•	•	•	•
0	0	0	0
1	1	1	1
2	2	2	2
3	3	3	3
4	4	4	4
5	5	5	5
6	•	•	•
7	7	7	7
8	8	8	8

.	6	6	7
•	•	•	•
0	0	0	0
1	1	1	1
2	2	2	2
3	3	3	3
4	4	4	4
5	5	5	5
6	•	•	•
7	7	7	•
8	8	8	8

Answer: 201 – either position is correct

	2	0	1
•	•	•	•
0	0	•	0
1	1	1	•
2	•	2	2
3	3	3	3

	2	0	1
•	•	•	•
0	•	0	0
1	1	•	1
2	2	2	2
3	3	3	3

**NOTE:** You may start your answers in any column, space permitting. Columns you don't need to use should be left blank.



31

A coastal geologist estimates that a certain country's beaches are eroding at a rate of 1.5 feet per year. According to the geologist's estimate, how long will it take, in years, for the country's beaches to erode by 21 feet?

32

If  $h$  hours and 30 minutes is equal to 450 minutes, what is the value of  $h$  ?

33

In the  $xy$ -plane, the point  $(3, 6)$  lies on the graph of the function  $f(x) = 3x^2 - bx + 12$ . What is the value of  $b$  ?

34

In one semester, Doug and Laura spent a combined 250 hours in the tutoring lab. If Doug spent 40 more hours in the lab than Laura did, how many hours did Laura spend in the lab?

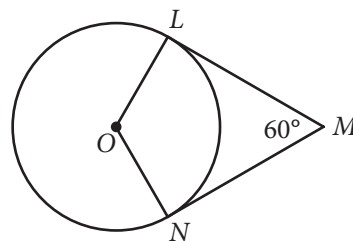


35

$$a = 18t + 15$$

Jane made an initial deposit to a savings account. Each week thereafter she deposited a fixed amount to the account. The equation above models the amount  $a$ , in dollars, that Jane has deposited after  $t$  weekly deposits. According to the model, how many dollars was Jane's initial deposit? (Disregard the \$ sign when gridding your answer.)

36



In the figure above, point  $O$  is the center of the circle, line segments  $LM$  and  $MN$  are tangent to the circle at points  $L$  and  $N$ , respectively, and the segments intersect at point  $M$  as shown. If the circumference of the circle is 96, what is the length of minor arc  $\widehat{LN}$ ?



Questions 37 and 38 refer to the following information.

A botanist is cultivating a rare species of plant in a controlled environment and currently has 3000 of these plants. The population of this species that the botanist expects to grow next year,  $N_{\text{next year}}$ , can be estimated from the number of plants this year,  $N_{\text{this year}}$ , by the equation below.

$$N_{\text{next year}} = N_{\text{this year}} + 0.2 \left( N_{\text{this year}} \right) \left( 1 - \frac{N_{\text{this year}}}{K} \right)$$

The constant  $K$  in this formula is the number of plants the environment is able to support.

37

According to the formula, what will be the number of plants two years from now if  $K = 4000$ ? (Round your answer to the nearest whole number.)

38

The botanist would like to increase the number of plants that the environment can support so that the population of the species will increase more rapidly. If the botanist's goal is that the number of plants will increase from 3000 this year to 3360 next year, how many plants must the modified environment support?

**STOP**

**If you finish before time is called, you may check your work on this section only.**

**Do not turn to any other section.**

The SAT

GENERAL DIRECTIONS

- You may work on only one section at a time.
- If you finish a section before time is called, check your work on that section. You may NOT turn to any other section.

MARKING ANSWERS

- Be sure to mark your answer sheet properly.

COMPLETE MARK

EXAMPLES OF INCOMPLETE MARKS

- You must use a No. 2 pencil.
- Carefully mark only one answer for each question.
- Make sure you fill the entire circle darkly and completely.
- Do not make any stray marks on your answer sheet.
- If you erase, do so completely. Incomplete erasures may be scored as intended answers.
- Use only the answer spaces that correspond to the question numbers.

USING YOUR TEST BOOK

- You may use the test book for scratch work, but you will not receive credit for anything that you write in your test book.
- After time has been called, you may not transfer answers from your test book to your answer sheet or fill in circles.
- You may not fold or remove pages or portions of a page from this book, or take the book or answer sheet from the testing room.

SCORING

- For each correct answer, you receive one point.
- You do not lose points for wrong answers; therefore, you should try to answer every question even if you are not sure of the correct answer.

IMPORTANT

The codes below are unique to your test book.  
Copy them on your answer sheet in boxes 8 and 9 and fill in the corresponding circles exactly as shown.

9

TEST ID

(Copy from back of test book.)

--	--	--	--	--	--	--

8

FORM CODE

(Copy and grid as on back of test book.)

A	A	A	A	0	0	0
B	B	B	B	1	1	1
C	C	C	C	2	2	2
D	D	D	D	3	3	3
E	E	E	E	4	4	4
F	F	F	F	5	5	5
G	G	G	G	6	6	6
H	H	H	H	7	7	7
I	I	I	I	8	8	8
J	J	J	J	9	9	9
K	K	K	K			
L	L	L	L			
M	M	M	M			
N	N	N	N			
O	O	O	O			
P	P	P	P			
Q	Q	Q	Q			
R	R	R	R			
S	S	S	S			
T	T	T	T			
U	U	U	U			
V	V	V	V			
W	W	W	W			
X	X	X	X			
Y	Y	Y	Y			
Z	Z	Z	Z			

Follow this link for more information on scoring your practice test:  
[www.sat.org/scoring](http://www.sat.org/scoring)