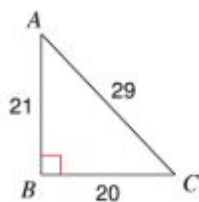
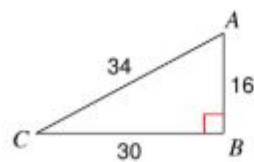


Find the value of each trigonometric ratio.

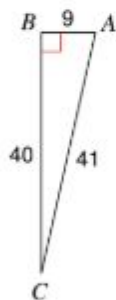
7) $\cos C$



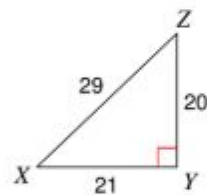
8) $\cos A$



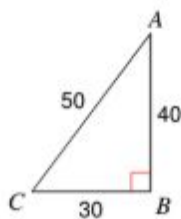
9) $\cos C$



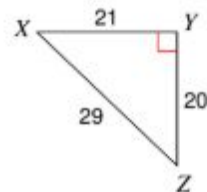
10) $\tan Z$



11) $\tan A$

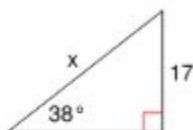


12) $\cos X$

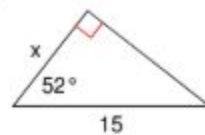


Find the missing side.

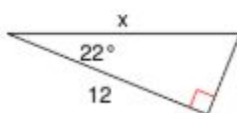
13)



14)



15)



16)



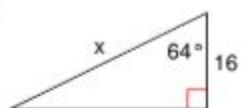
23)



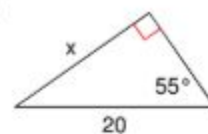
24)



31)

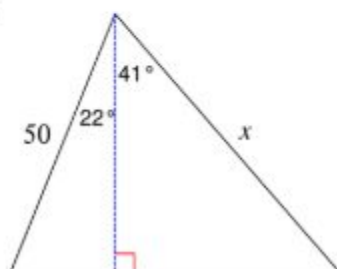


32)

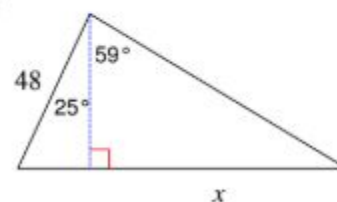


Find the length of the side labeled x .

33)



34)

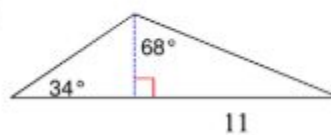


Find the area of each triangle.

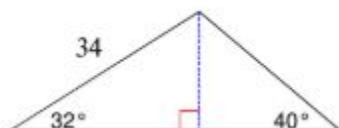
35)



36)



37)



38)

