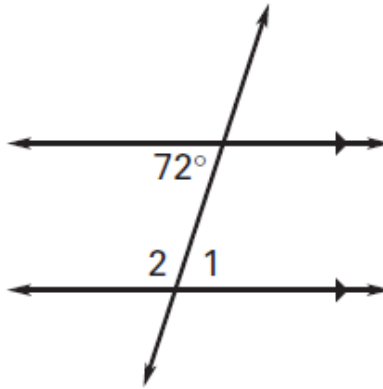
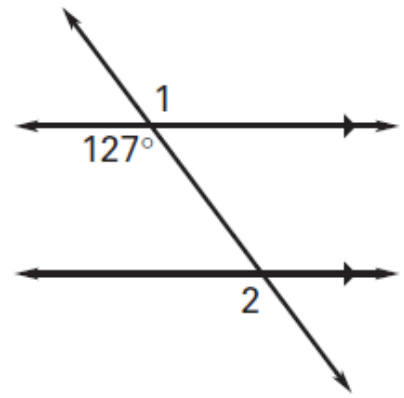


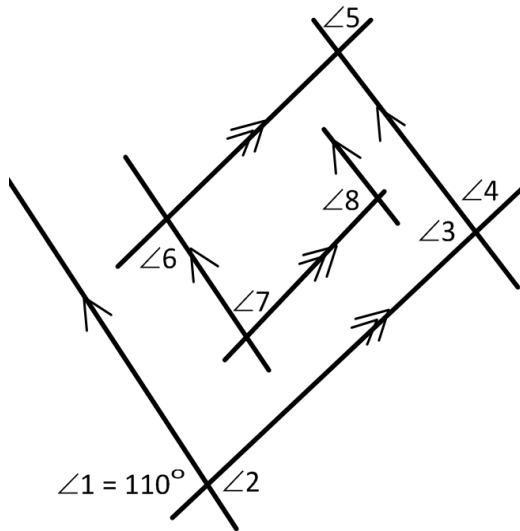
$\angle 1 = \underline{\hspace{2cm}}$ because it is _____ with 118°
 $\angle 2 = \underline{\hspace{2cm}}$ because it is _____ with 118°



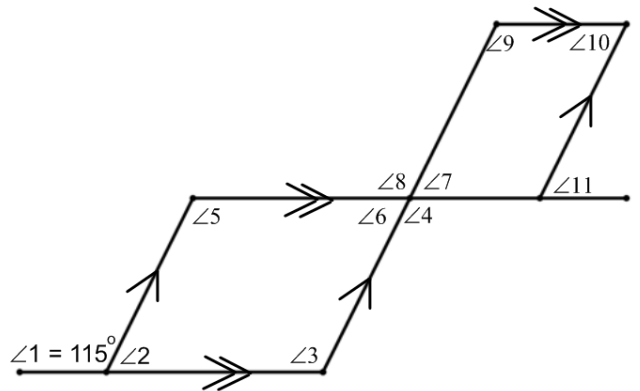
$\angle 1 = \underline{\hspace{2cm}}$ because it is _____ with 72°
 $\angle 2 = \underline{\hspace{2cm}}$ because it is _____ with 72°



$\angle 1 = \underline{\hspace{2cm}}$ because it is _____ with 127°
 $\angle 2 = \underline{\hspace{2cm}}$ because it is _____ with 127°



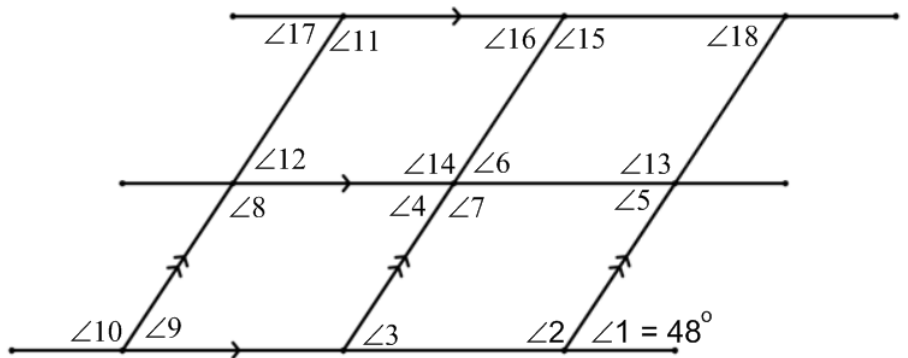
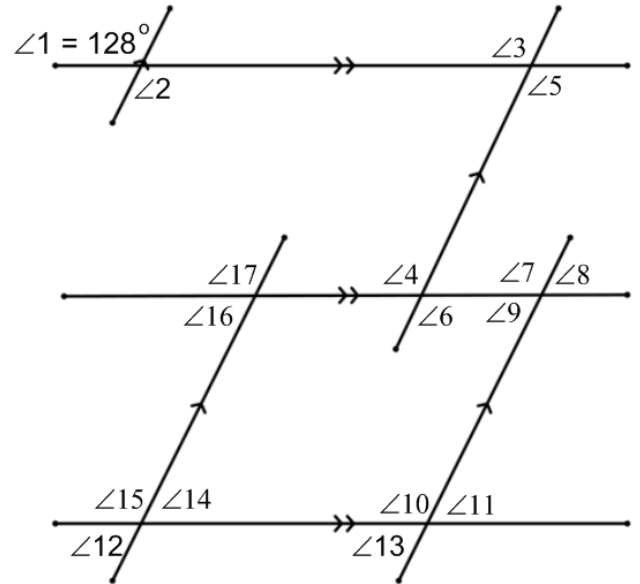
$\angle 1 = \underline{110^\circ}$
 $\angle 2 = \underline{\hspace{2cm}}$
 because it is _____ with $\angle 1$
 $\angle 3 = \underline{\hspace{2cm}}$
 because it is _____ with $\angle 2$
 $\angle 4 = \underline{\hspace{2cm}}$
 because it is _____ with $\angle 3$
 $\angle 5 = \underline{\hspace{2cm}}$
 because it is _____ with $\angle 4$
 $\angle 6 = \underline{\hspace{2cm}}$
 because it is _____ with $\angle 5$
 $\angle 7 = \underline{\hspace{2cm}}$
 because it is _____ with $\angle 6$
 $\angle 8 = \underline{\hspace{2cm}}$
 because it is _____ with $\angle 7$



$\angle 1 = \underline{115^\circ}$
 $\angle 2 = \underline{\hspace{2cm}}$
 because it is _____ with $\angle 1$
 $\angle 3 = \underline{\hspace{2cm}}$
 because it is _____ with $\angle 2$
 $\angle 4 = \underline{\hspace{2cm}}$
 because it is _____ with $\angle 3$
 $\angle 5 = \underline{\hspace{2cm}}$
 because it is _____ with $\angle 4$
 $\angle 6 = \underline{\hspace{2cm}}$
 because it is _____ with $\angle 5$
 $\angle 7 = \underline{\hspace{2cm}}$
 because it is _____ with $\angle 6$
 $\angle 8 = \underline{\hspace{2cm}}$
 because it is _____ with $\angle 7$
 $\angle 9 = \underline{\hspace{2cm}}$
 because it is _____ with $\angle 8$
 $\angle 10 = \underline{\hspace{2cm}}$
 because it is _____ with $\angle 9$

$\angle 1 = 128^\circ$

- $\angle 2 =$ _____ because it is _____ with $\angle 1$
 $\angle 3 =$ _____ because it is _____ with $\angle 2$
 $\angle 4 =$ _____ because it is _____ with $\angle 3$
 $\angle 5 =$ _____ because it is _____ with $\angle 4$
 $\angle 6 =$ _____ because it is _____ with $\angle 5$
 $\angle 7 =$ _____ because it is _____ with $\angle 6$
 $\angle 8 =$ _____ because it is _____ with $\angle 7$
 $\angle 9 =$ _____ because it is _____ with $\angle 8$
 $\angle 10 =$ _____ because it is _____ with $\angle 9$
 $\angle 11 =$ _____ because it is _____ with $\angle 10$
 $\angle 12 =$ _____ because it is _____ with $\angle 11$
 $\angle 13 =$ _____ because it is _____ with $\angle 12$
 $\angle 14 =$ _____ because it is _____ with $\angle 13$
 $\angle 15 =$ _____ because it is _____ with $\angle 14$
 $\angle 16 =$ _____ because it is _____ with $\angle 15$
 $\angle 17 =$ _____ because it is _____ with $\angle 16$



$\angle 1 = 48^\circ$

- $\angle 2 =$ _____ because it is _____ with $\angle 1$
 $\angle 3 =$ _____ because it is _____ with $\angle 2$
 $\angle 4 =$ _____ because it is _____ with $\angle 3$
 $\angle 5 =$ _____ because it is _____ with $\angle 4$
 $\angle 6 =$ _____ because it is _____ with $\angle 5$
 $\angle 7 =$ _____ because it is _____ with $\angle 6$
 $\angle 8 =$ _____ because it is _____ with $\angle 7$
 $\angle 9 =$ _____ because it is _____ with $\angle 8$
 $\angle 10 =$ _____ because it is _____ with $\angle 9$
 $\angle 11 =$ _____ because it is _____ with $\angle 10$
 $\angle 12 =$ _____ because it is _____ with $\angle 11$
 $\angle 13 =$ _____ because it is _____ with $\angle 12$
 $\angle 14 =$ _____ because it is _____ with $\angle 13$
 $\angle 15 =$ _____ because it is _____ with $\angle 14$
 $\angle 16 =$ _____ because it is _____ with $\angle 15$
 $\angle 17 =$ _____ because it is _____ with $\angle 16$
 $\angle 18 =$ _____ because it is _____ with $\angle 17$