
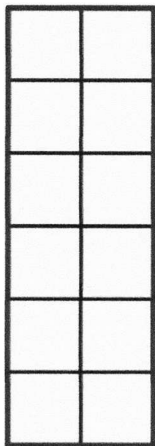


Name _____

Date _____


1. Each  is a square unit. Count to find the area of each rectangle. Then, circle all the rectangles with an area of 12 square units.

a.



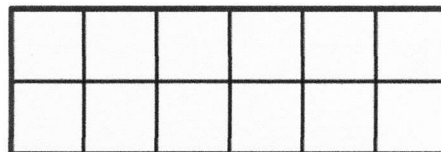
Area = _____ square units

b.




Area = _____ square units

c.




Area = _____ square units

d.



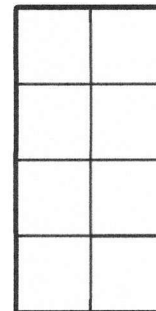
Area = _____ square units

e.



Area = _____ square units

f.



Area = _____ square units