


2. Angela uses squares to find the area of a rectangle. Her work is shown below.


- a. How many squares did she use to cover the rectangle?



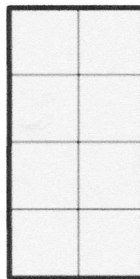
_____ squares

- b. What is the area of the rectangle in square units? Explain how you found your answer.


3. Each  is 1 square unit. Which rectangle has the largest area? How do you know?



Rectangle A



Rectangle B



Rectangle C