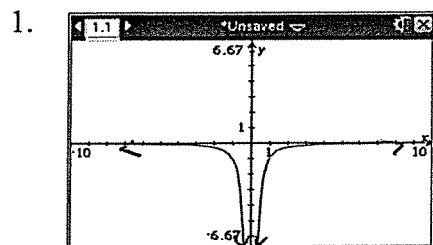


T/PC  
Function Families Review

Name:  
Hour:

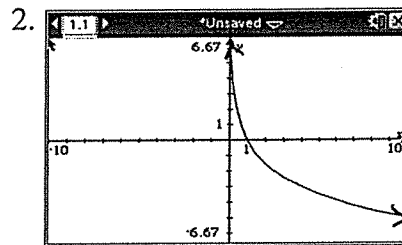
For 1 – 6, name the family that each graph belongs to, write a possible equation and tell the type of function. (1 to 1 or Many to 1)



Family:

Equation:

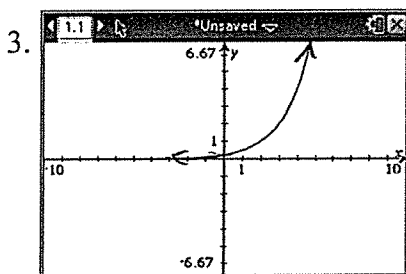
Type:



Family:

Equation:

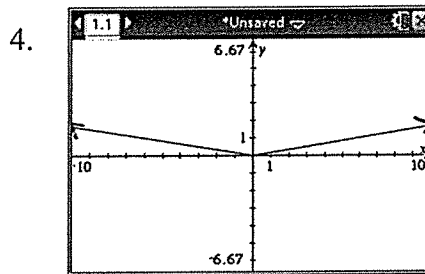
Type:



Family:

Equation:

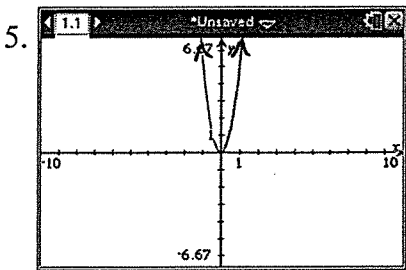
Type:



Family:

Equation:

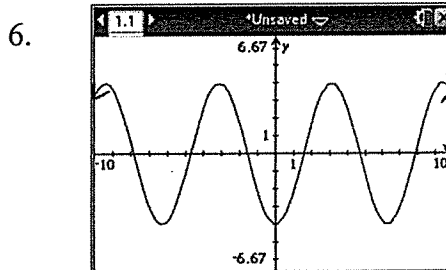
Type:



Family:

Equation:

Type:



Family:

Equation:

Type:

**For 7 – 10, tell the family each function belongs to and sketch a graph of each function.**

7.  $y = -4\sqrt[3]{x}$

8.  $y = -\tan x$

9.  $y = 2(3)^x$

10.  $y = 3x^5$