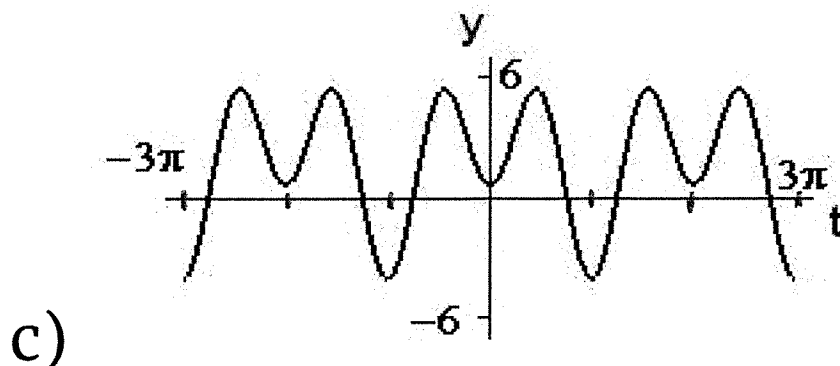
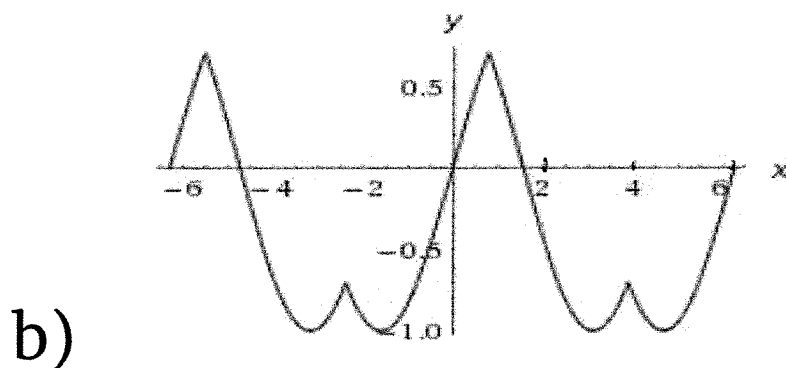
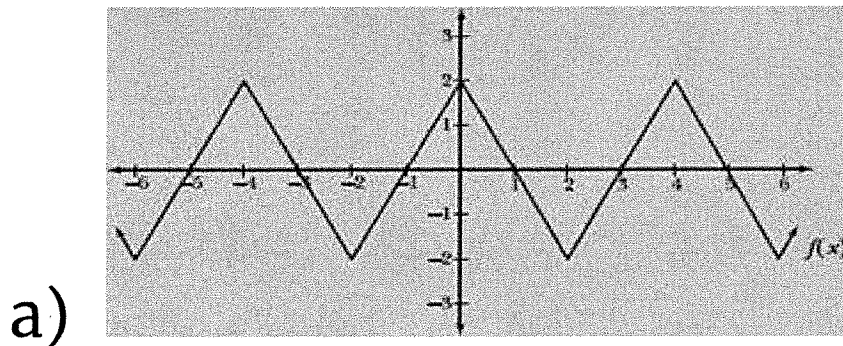


Station #1

1) Explain how to calculate the *PERIOD* from a graph for a periodic function.

2) Calculate the period for the following graphs.



Think about the units for axis, enough information is given to figure it out :)

Station # 2

- 1) Graph & describe $y = \sin(\theta)$
 - a) State x-intercepts of 1 cycle
 - b) State max of 1 cycle
 - c) State min of 1 cycle

2) Make a table & graph the following $\sin(\theta)$ functions.

a) $3 \sin\left(\frac{1}{2} \theta\right)$

b) $-4 \sin(\theta)$

For # 2, do the tables first. Then graph. If you need to -
You can finish the graphs in another station that's
quick or for hw.

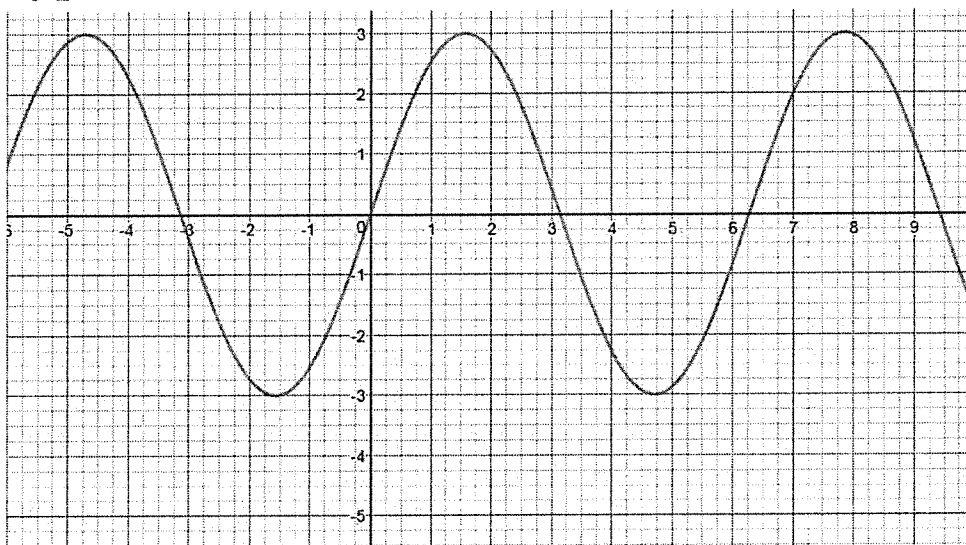
Station # 3

1) Sketch the graph from the table.

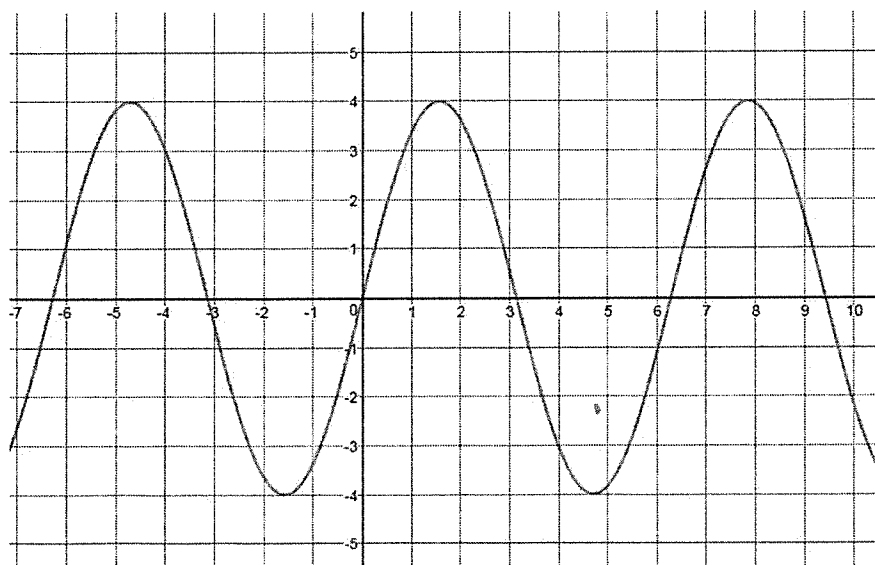
2) What is the period and amplitude of the function in the table?

x	$f(x)$
0	0
$\frac{\pi}{8}$	2
$\frac{\pi}{4}$	0
$\frac{3\pi}{8}$	-2
$\frac{\pi}{2}$	0

3) Calculate the *amplitude* for these graphs if the period is the typical value.



a)



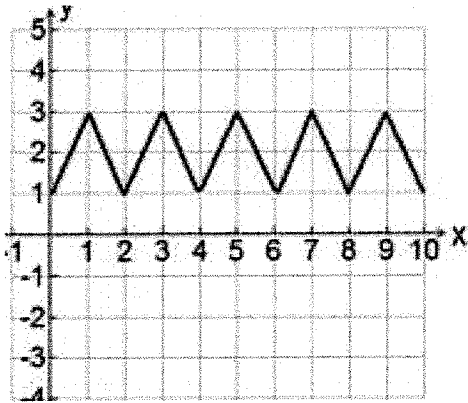
b)

Station # 4

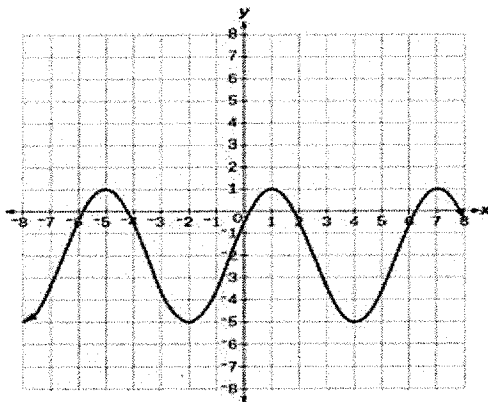
1) Explain how you would calculate the *amplitude* from a graph for a periodic function.

2) Calculate the amplitude for each graph.

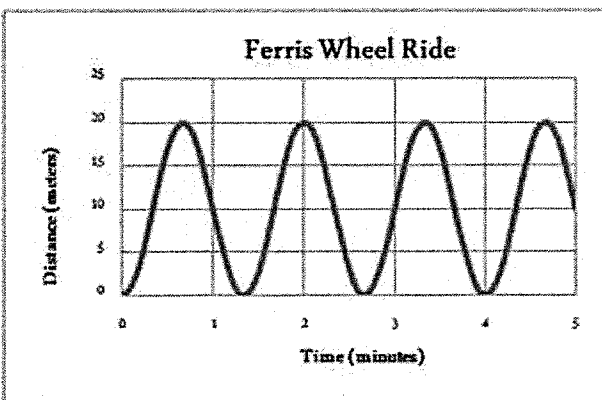
a)



b)

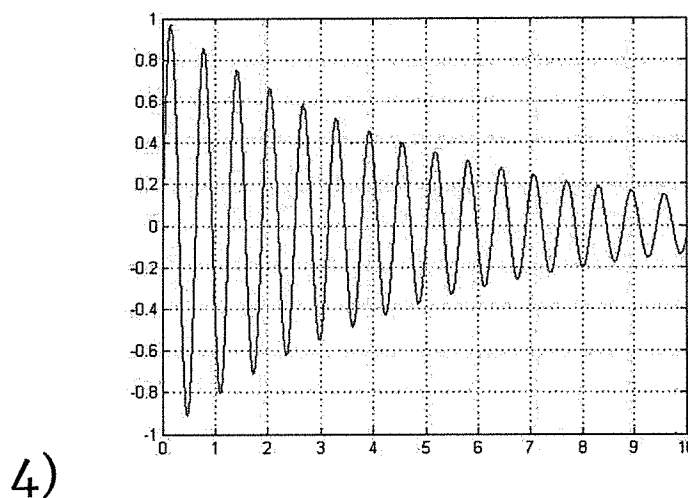
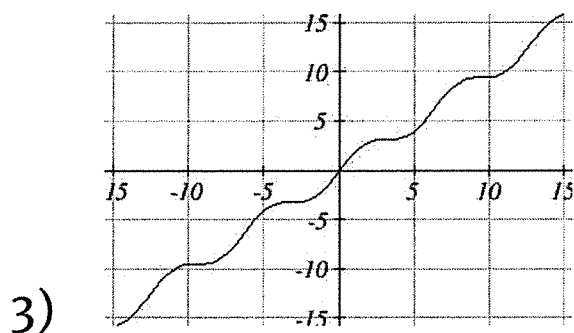
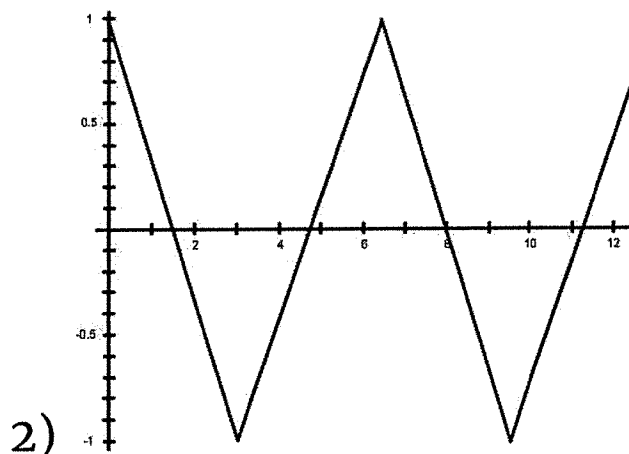
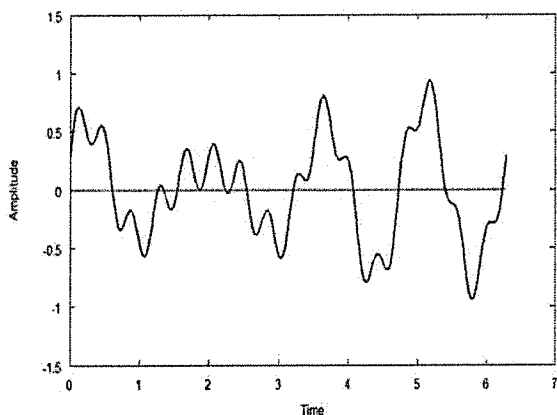


c)



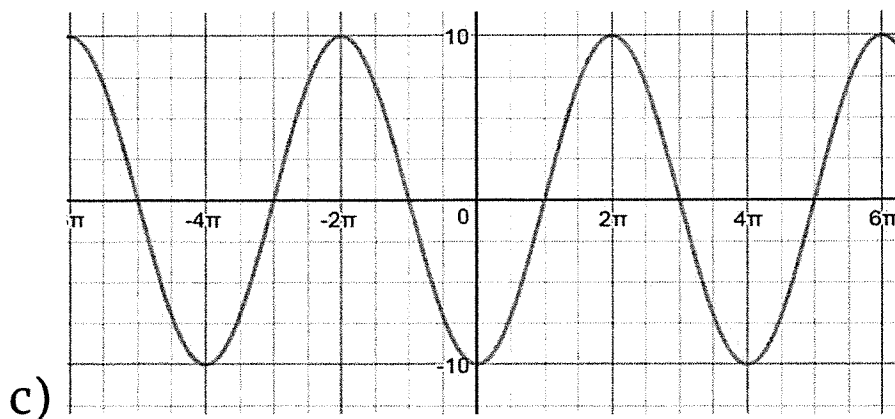
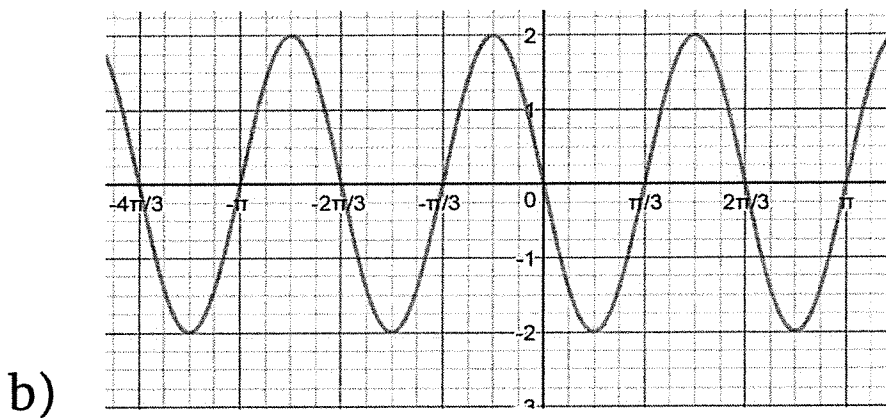
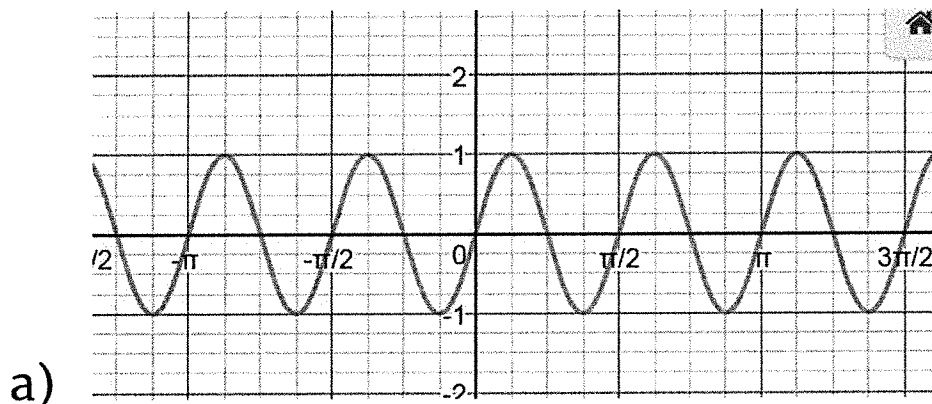
Station # 5

State whether or not each graph is periodic. Explain why or why not. If it is periodic, calculate the period.



Station # 6

- 1) Determine whether each graph is the $\sin(\theta)$ function. Explain why or why not.
- 2) Calculate the period and amplitude for the following graphs.



Station # 7

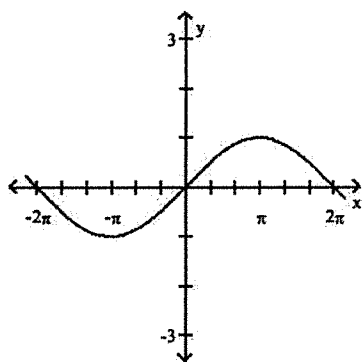
Create a table and graph the following $\sin(\theta)$ functions

do first if you don't have time to finish,
finish at a quick station
or for hw.

1) $-2 \sin(\frac{1}{2} \theta)$

2) $4 \sin(2 \theta)$

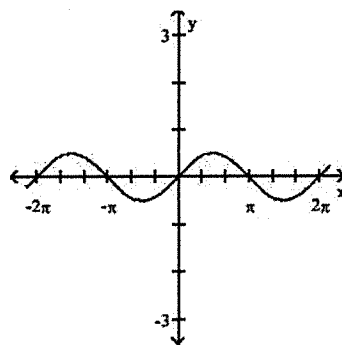
3) Match the equation to the graph and explain how you know.



a)

$$y = \sin\left(\frac{1}{2}x\right)$$

$$y = \frac{1}{2} \sin x$$



b)

Station #8

Given the information about $\sin(\theta)$, create a table and graph the sine function.

DO FIRST

↑
If you can't finish,
finish in a "quick"
Station or for hw

1) $a = 2$

$b = 4$

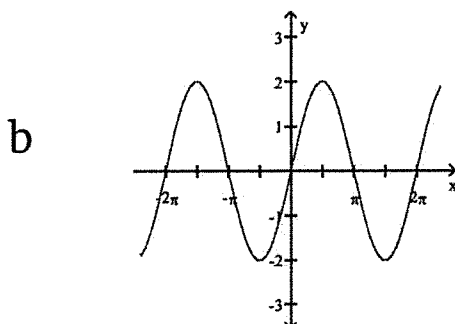
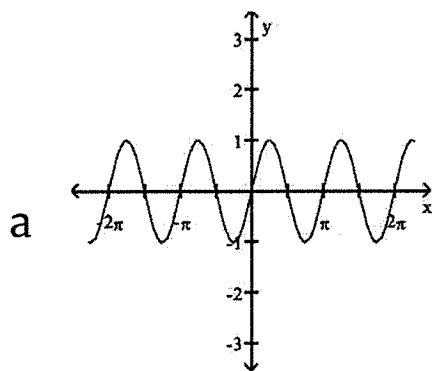
2) Amplitude is 3

Period is π

3) Match the graph to the correct function. Explain how you know.

$$y = \sin 2x$$

$$y = 2 \sin x$$



Name:_____.

Student Recording Sheet

Station 1 1)	Station 1 2a)	Station 2 1)Graph	Station 2 1) Features
Station 1 2b)	Station 1 2c)	Station 2 2a)	Station 2 2b)
Station 3 1)	Station 3 2)	Station 4 1)	Station 4 2a)
Station 3 3a)	Station 3 3b)	Station 4 2b)	Station 4 2c)

Station 5 1)	Station 5 2)	Station 6 1)	Station 6 2a)
Station 5 3)	Station 5 4)	Station 6 2b)	Station 6 2c)
Station 7 1)	Station 7 2)	Station 8 1)	Station 8 2)
Station 7 3)	Station 7 Extra workspace :)	Station 8 3a)	Station 8 3b)