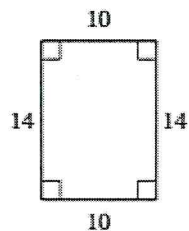


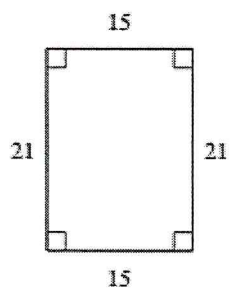
Use the definition from the previous page to complete the following.

**State if the polygons are similar.**

1)

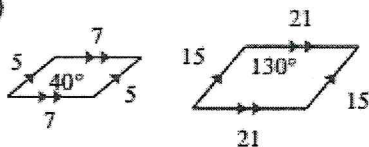


Work:



Answer:

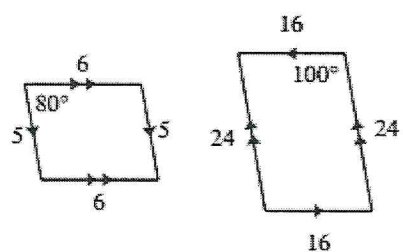
2)



Work:

Answer:

3)



Work:

Answer: