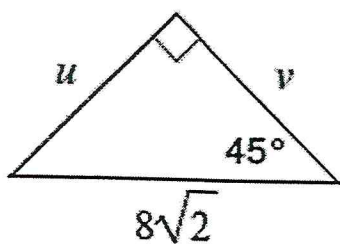
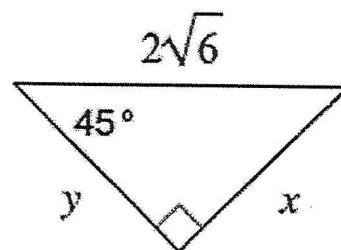


DIRECTIONS: Find the missing values.

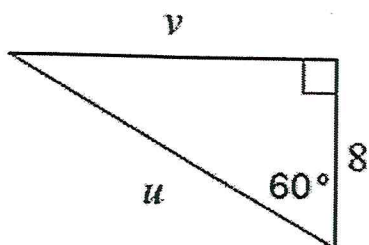
1.



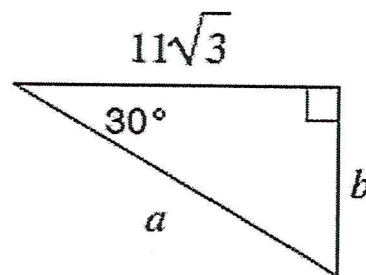
2.



3.



4.



DIRECTIONS: Convert the following degree measures into radian measures.

1.  $-300^\circ$

2.  $150^\circ$

3.  $-90^\circ$

DIRECTIONS: Convert the following radian measures into degree measures.

7.  $3\pi$  radians

8.  $\frac{11\pi}{10}$  radians

9.  $-\frac{2\pi}{3}$  radians