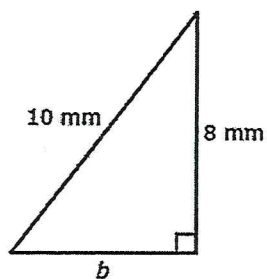
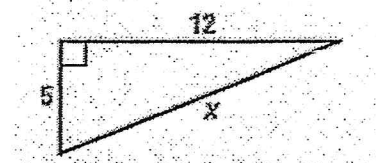


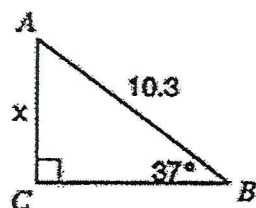
7.



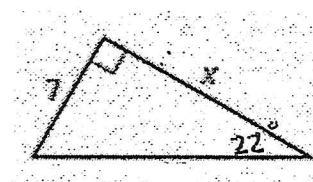
8.



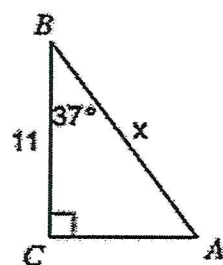
9.



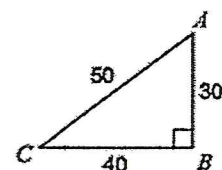
10)



11:



12) Find a) $\sin C$



b) $\tan A$

12) A triangle has sides with lengths of 12 inches, 16 inches, and 20 inches. Is it a right triangle?