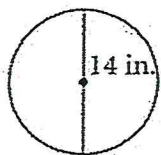


Practice 1

Answers

Find the area and the circumference for each circle. Leave your answer in terms of π

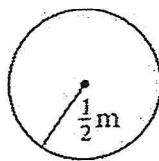
1)



Area =

Circumference =

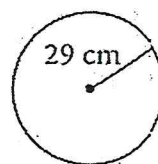
2)



Area =

Circumference =

3)



Area =

Circumference =

4. What is the difference in the areas of a circular table with diameter 6 ft and a circular table with diameter 8 ft?