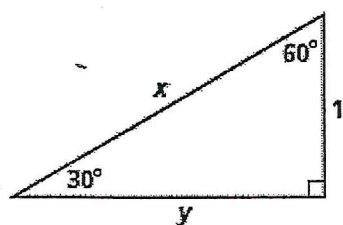
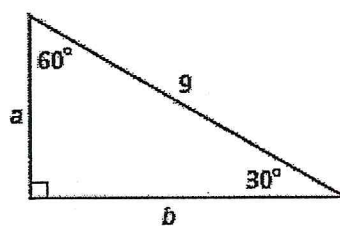


Find the value of each variable. Leave your answers in simplest radical form.

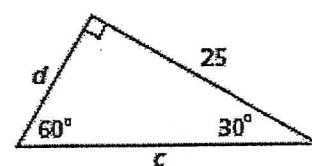
7.



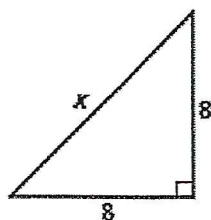
8.



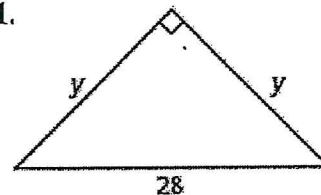
9.



10.



11.



*Algebra* Find the value of each variable. Leave your answers in simplest radical form.

12.

