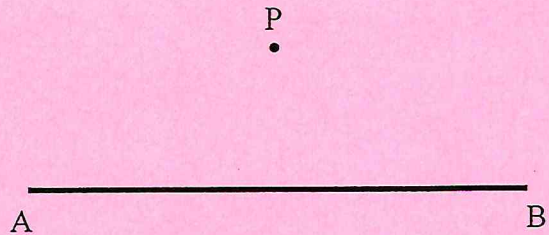
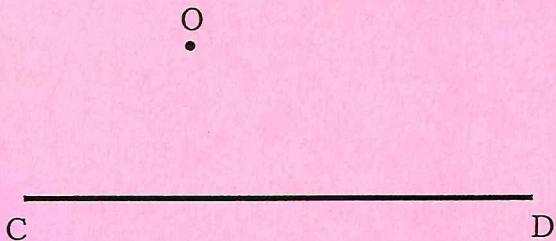


Name: _____ Period: _____

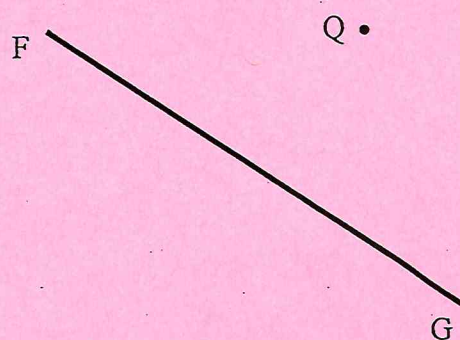
Practice; Construct one line **parallel** and one line **perpendicular** to \overline{AB} through point P.



1) Construct one line **parallel** and one line **perpendicular** to \overline{CD} through point O.



2) Construct one line **parallel** and one line **perpendicular** to \overline{FG} through point Q.



3) Make all three constructions

a) Construct a line **perpendicular** to \overline{YZ} through X.

b) Construct a line **perpendicular** to \overline{XZ} through Y.

c) Construct a line **perpendicular** to \overline{XY} through Z.

d) Construct a line **parallel** to \overline{XY} through Z.

e) Construct a line **parallel** to \overline{XZ} through Y.

f) Construct a line **parallel** to \overline{YZ} through X.

