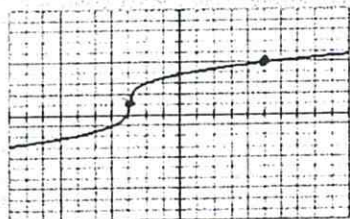


Write the equations for the following graphs.
Show ALL steps.

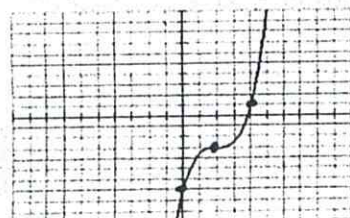
1.

NORMAL FLOAT AUTO REAL RADIAN MP



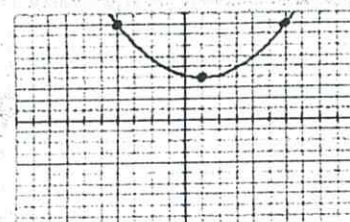
2.

NORMAL FLOAT AUTO REAL RADIAN MP



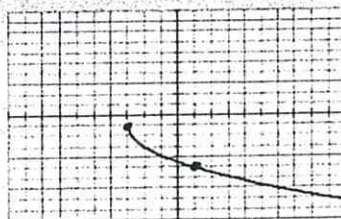
3.

NORMAL FLOAT AUTO REAL RADIAN MP



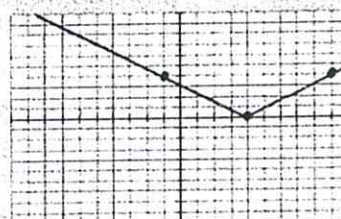
4.

NORMAL FLOAT AUTO REAL RADIAN MP



5.

NORMAL FLOAT AUTO REAL RADIAN MP



6.

NORMAL FLOAT AUTO REAL RADIAN MP

