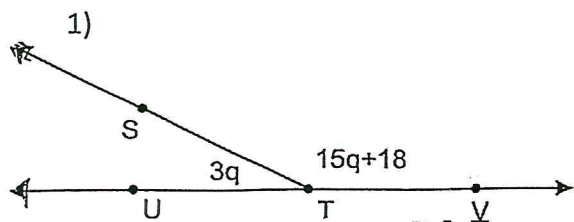


For each problem:

- Name the linear pair of angles
- Set up and solve an algebraic equation
- Find the measure of each of the two angles, showing the substitution.

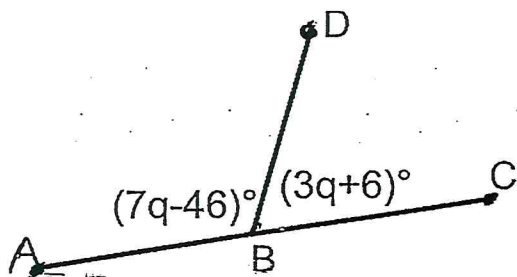


a)

b)

c)

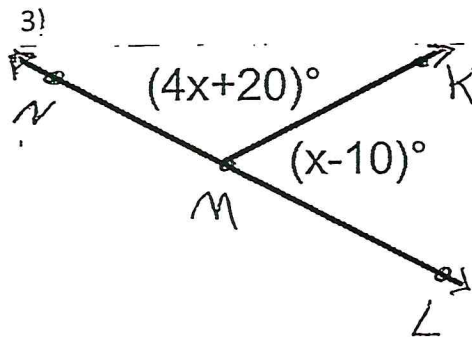
2)



a)

b)

c)



a)

b)

c)