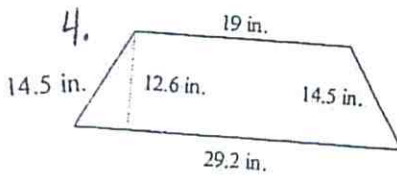
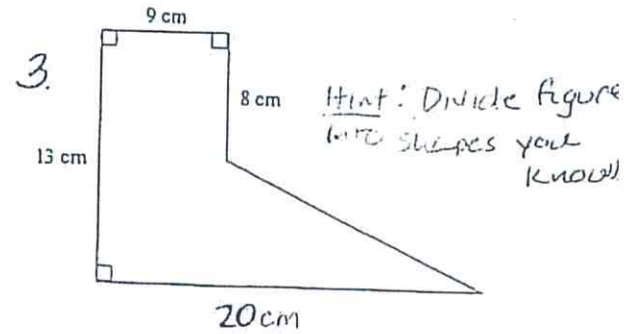
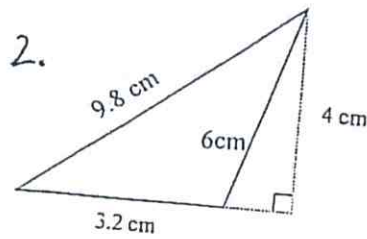
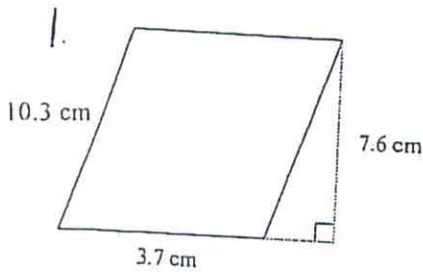
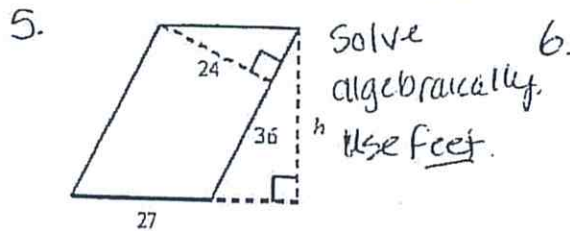


Show all work. [#] Figures are not drawn to scale. Use proper units

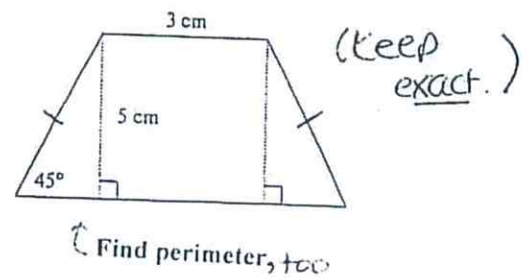
Find the area and perimeter for each figure in 1-4.



Find the value of h in the parallelogram.

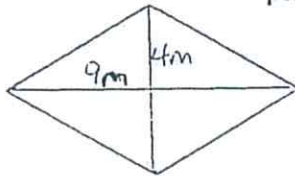


Find the area of the trapezoid.



7. Find the area of the rhombus.

Find perimeter.

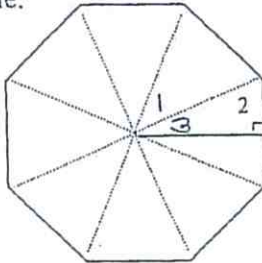


8.

Find the area of a regular decagon with an apothem 15.7 feet long and a side 9 feet long. Round your answer to the nearest tenth.

9. Given the regular polygon, find the measure of each numbered angle.

Show work for each.



10.

Find the circumference. ^{and area.} Leave your answer in terms of π .

