



For each    a) find the inverse equation.    b) Graph both functions    c) Find domain and range  
d) Determine if each is a function.

7.  $y = \sqrt{x-4}$




D:  
R:  
Function?  
Find Inverse Equation:

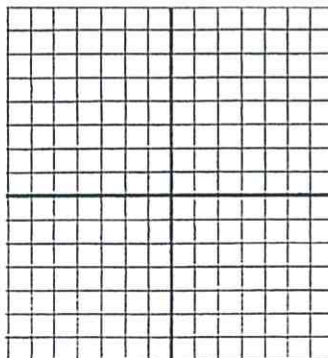


D:  
R:  
Function?

8.  $y = 3x^2 + 6$



D:  
R:  
Function?  
Find Inverse Equation:



D:  
R: