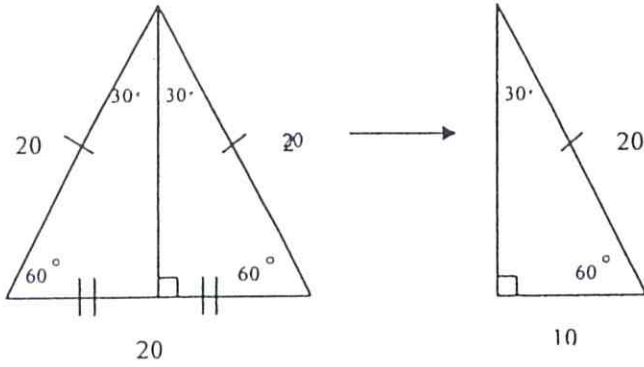


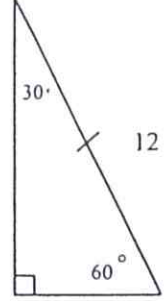
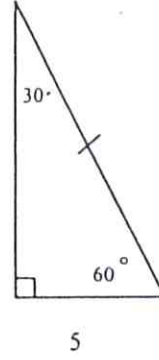
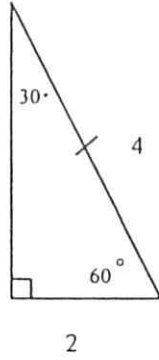
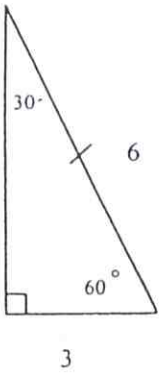
30°-60°-90° Triangles are half of an Equilateral Triangle.



Use Pythagorean Theorem to find missing leg.

$$10^2 + b^2 = 20^2$$

5.



6. Use this pattern to find the missing sides of the following 30°-60°-90° triangles.

