

Name _____ Class _____ Date _____


Practice 9-4 **Symmetry**

Draw all lines of symmetry for each figure.


1.



2.



3.




4.



Judging from appearance, tell what type(s) of symmetry each figure has. If it has line symmetry, sketch the line(s) of symmetry. If it has rotational symmetry, draw the point of rotation.

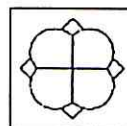
5.



6.



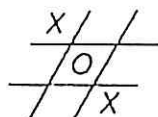
7.



11.



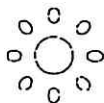
12.



13.

BOOK

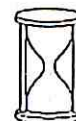
14.



15.

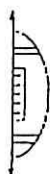


16.



Each diagram shows a figure folded along a line of symmetry. Sketch the unfolded figure.

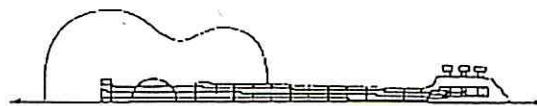
17.



18.



19.



* Plus: Find 2 pictures from newspaper, magazines, etc., of objects with rotational + reflectional (leech) symmetry. DO NOT USE PIX OFF YOUR COMPUTER THAT YOU GOOGLED!