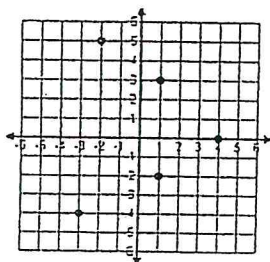
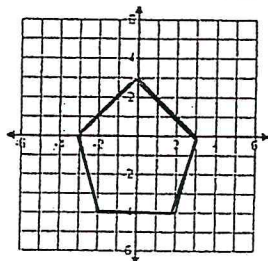


State the domain and range for each graph and then tell if the graph is a function (write yes or no).

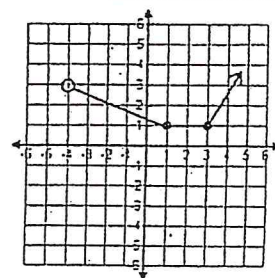
- 1) Domain _____
Range _____
Function? _____



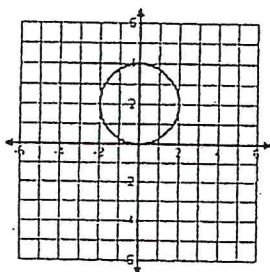
- 2) Domain _____
Range _____
Function? _____



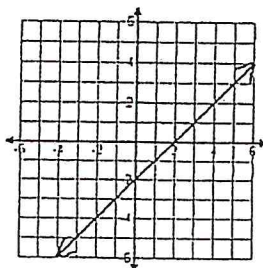
- 3) Domain _____
Range _____
Function? _____



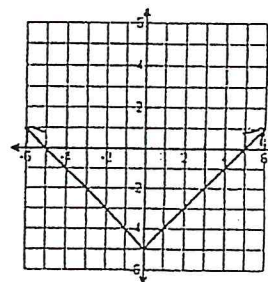
- 4) Domain _____
Range _____
Function? _____



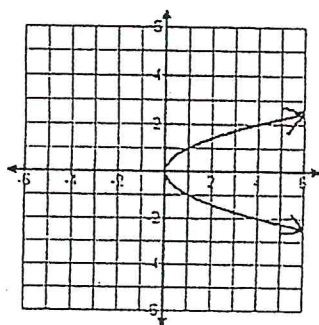
- 5) Domain _____
Range _____
Function? _____



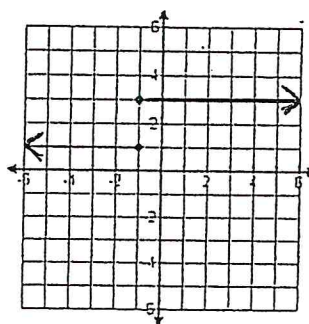
- 6) Domain _____
Range _____
Function? _____



- 7) Domain _____
Range _____
Function? _____



- 8) Domain _____
Range _____
Function? _____



- 9) Domain _____
Range _____
Function? _____

