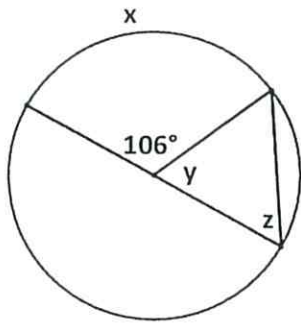
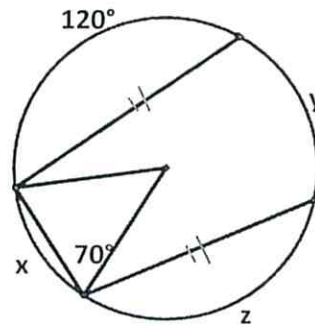


Note: diagrams are NOT drawn to scale.

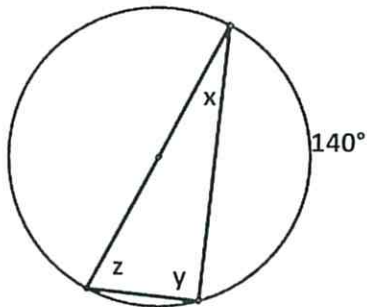
Name: _____



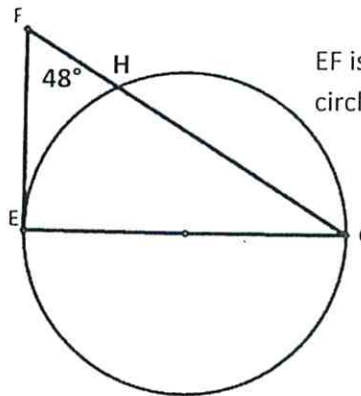
X: _____
Y: _____
Z: _____



X: _____
Y: _____
Z: _____

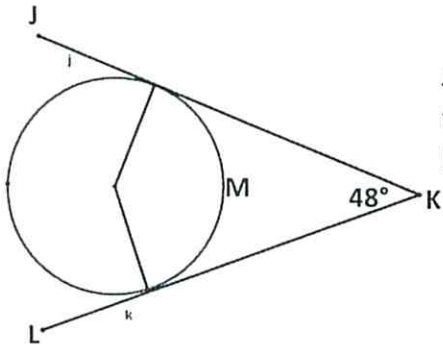


X: _____
Y: _____
Z: _____

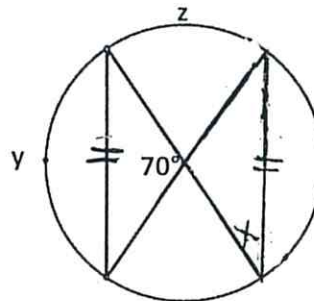


EF is tangent to the circle at point E

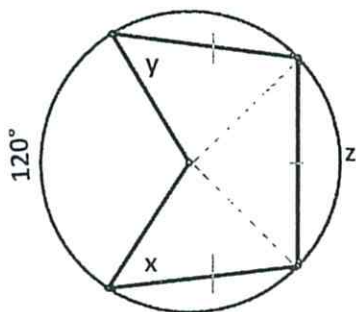
$m\angle E$: _____
 $m\widehat{EH}$: _____
 $m\angle G$: _____
 $m\widehat{HG}$: _____



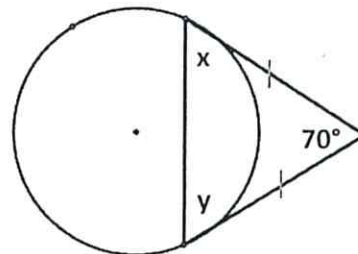
JK and LK are tangent to the circle. Find the arc labeled M.



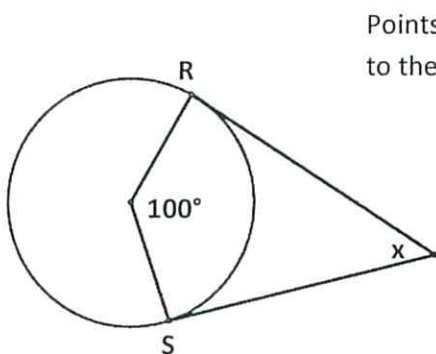
X: _____
Y: _____
Z: _____



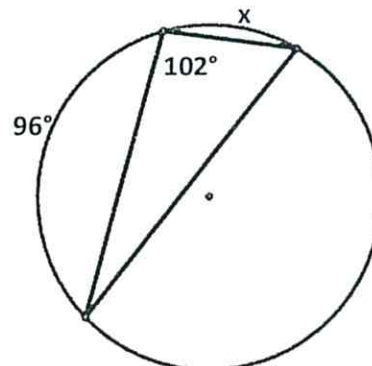
X: _____
Y: _____
Z: _____



X: _____
Y: _____



Points R & S are Tangent to the circle. Find x.



X: _____