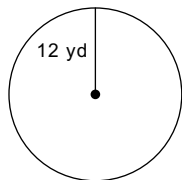


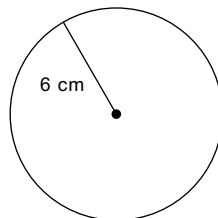
Area and Circumference of a Circle

Find the area of each using the formula $A = \pi r^2$. Use your calculator's value of π . Round your answer to the nearest tenth.

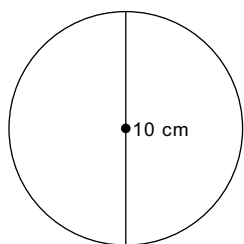
1)



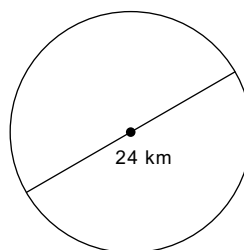
2)



3)

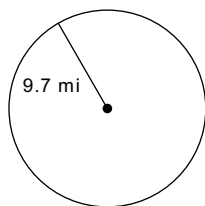


4)

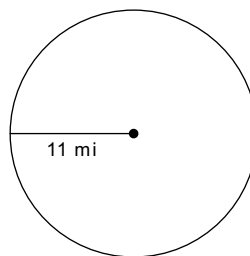


Find the circumference of each using the formula $C = 2\pi r$ or $C = \pi d$. Use your calculator's value of π . Round your answer to the nearest tenth.

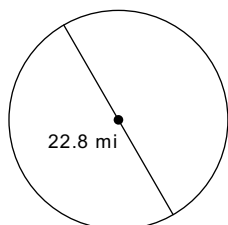
5)



6)



7)



8)

