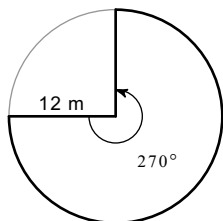


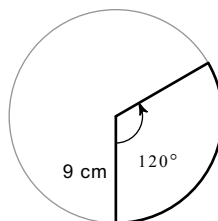
Arc Length and Sector Area

Find the area of each sector. Round your answers to the nearest tenth. Remember to include the correct units.

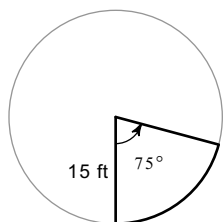
1)



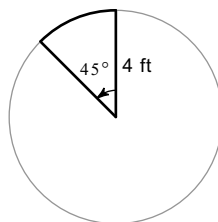
2)



3)

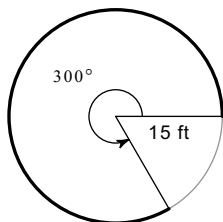


4)

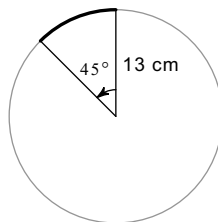


Find the length of each arc. Round your answers to the nearest tenth. Remember to include the correct units.

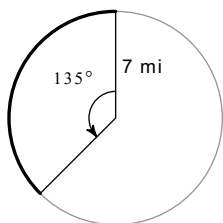
5)



6)



7)



8)

