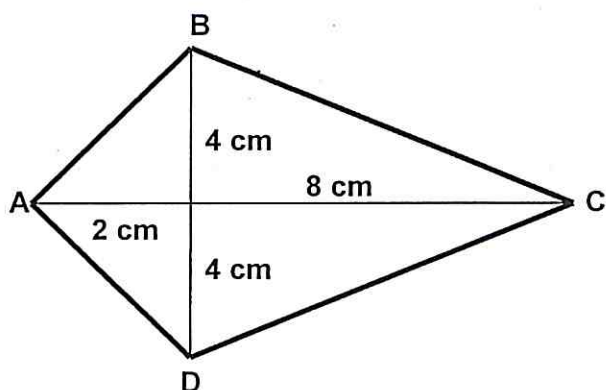


Common Assessment Review for 6.G.A.1, 6.G.A.3, 6.NS.C.8



$$\begin{array}{r} 8 \\ + 32 \\ \hline \end{array}$$

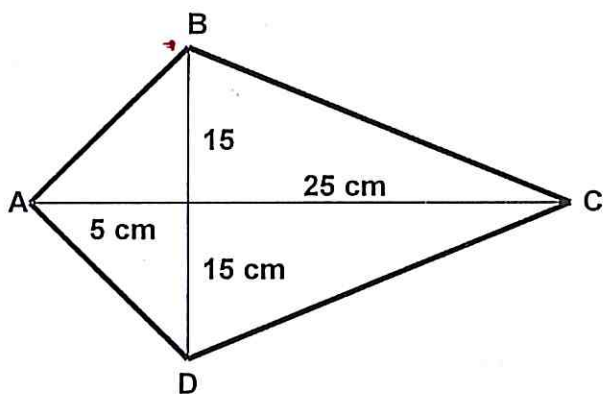
5. Find the total area of figure ABCD in square centimeters. Show work to support your answer.

a) 80 cm^2

b) 40 cm^2

c) 256 cm^2

d) 80 cm^2



$$\begin{array}{r} 75 \\ + 375 \\ \hline \end{array}$$

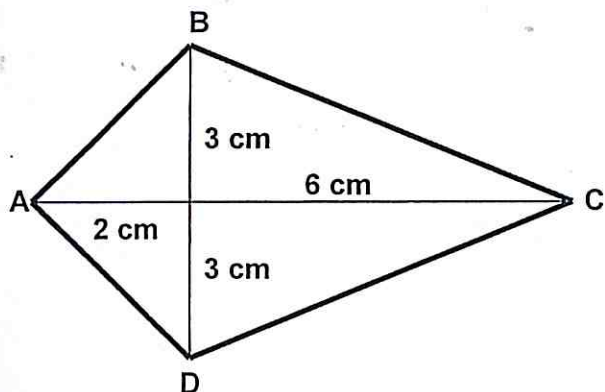
6. Find the total area of figure ABCD in square centimeters. Show work to support your answer.

a) 900 cm^2

b) 125 cm^2

c) 96 cm^2

d) 450 cm^2



$$\begin{array}{r} 6 \\ + 18 \\ \hline \end{array}$$

7. Find the total area of figure ABCD in square centimeters. Show work to support your answer.

a) 24 cm^2

b) 225 cm^2

c) 36 cm^2

d) 108 cm^2