

Name: \_\_\_\_\_

1<sup>st</sup> Grade: Unit 9 Pre-Test

Write the next 3 numbers in order.

1.NBT.1

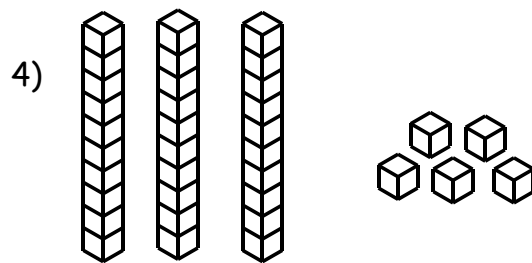
1) 92, 93, 94, \_\_\_\_\_, \_\_\_\_\_, \_\_\_\_\_

2) 44, 45, 46, \_\_\_\_\_, \_\_\_\_\_, \_\_\_\_\_

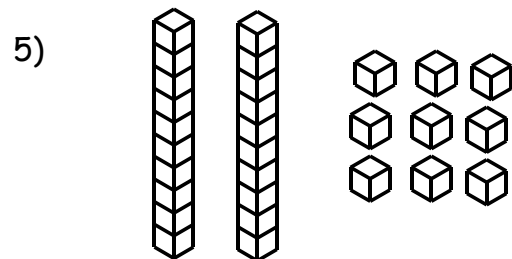
3) 67, 68, 69, \_\_\_\_\_, \_\_\_\_\_, \_\_\_\_\_

Write the number that is represented by the Base-10 blocks.

1.NBT.1



\_\_\_\_\_



\_\_\_\_\_

6) Circle the number below that is 10 more than 26.

1.NBT.5/1.NBT.6

16      46      36      27

7) Circle the number that is 10 less than 75.

85      66      65      74

8) Circle the number that is 10 less than 64.

1.NBT.5/1.NBT.6

63

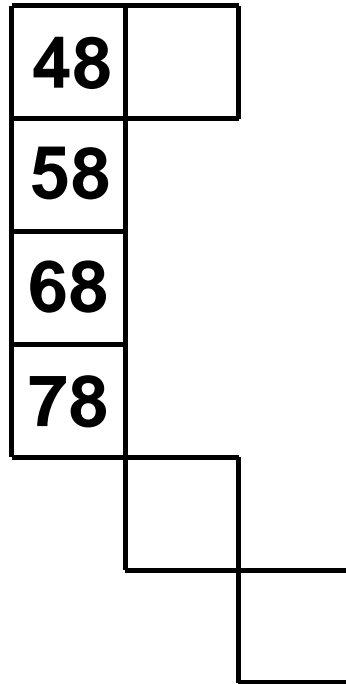
84

54

74

9) Complete the number grid puzzle.

1.NBT.5/1.NBT.6



10) Explain how you used the patterns in the number grid to finish the puzzle.

1.NBT.5/1.NBT.6

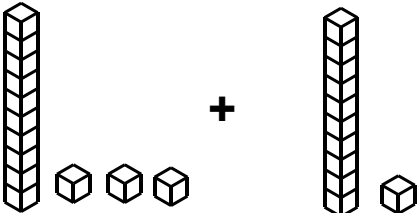
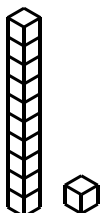
---

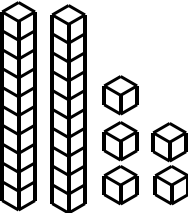
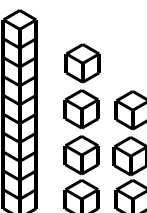
---

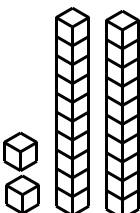
---

Which Base-10 block addition problems have a sum of 42?

1.NBT.4

11)  +  Yes No

12)  +  Yes No

13)  +  Yes No

Break apart one or more number to make them easier to solve.

Write the sum of the numbers in the circle.

1.NBT.4

14) 
$$\begin{array}{c} 32 \\ \swarrow \downarrow \\ \square \quad \square \end{array} + \begin{array}{c} 15 \\ \swarrow \downarrow \\ \square \quad \square \end{array} = \bigcirc$$

15) What strategy did you use?

1.NBT.4

---




---

Which shapes are cut into halves?

1.G.3

16)



Yes

No

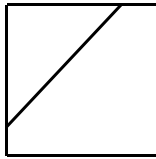
17)



Yes

No

18)



Yes

No

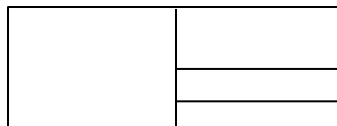
19) Divide the figure into fourths. Shade in  $\frac{1}{4}$ .

1.G.3



20) John said the shape is cut into fourths. Is he correct?

1.G.3



Explain your answer.

---

---