

Name: _____

1st Grade: PRE-Test Unit 4

Use the arrows below to answer the following questions.

1.MD.1

Arrow 1: 

Arrow 2: 

Arrow 3: 

- | | | | |
|----|--------------------------|-----|----|
| 1) | Arrow 1 is the shortest. | Yes | No |
| 2) | Arrow 3 is the longest. | Yes | No |
| 3) | Arrow 2 is the shortest. | Yes | No |

Compare the object below to answer the following questions.

1.MD.1



Crayon



Penny



Scissors

- 4) Which object is the longest? _____
- 5) Which object is the shortest? _____

Using dominoes, measure the length of the baseball bat below.

1.MD.2



- | | | | |
|----|--------------------------------|-----|----|
| 6) | The length is about 2 dominoes | Yes | No |
| 7) | The length is about 3 dominoes | Yes | No |
| 8) | The length is about 4 dominoes | Yes | No |

Measure the object with unit cubes and dominoes.
Write its length on the line.

1.MD.2




- 9) The marker measures about _____ unit cubes.
- 10) The marker measures about _____ dominoes

Which dominoes have a sum of 10?

1.OA.6


11)



Yes

No


12)



Yes

No

13)




Yes

No


Circle the numbers in each box that have a sum of 12.

1.OA.6

14)




15)




Help the bears count by filling in the empty boxes.

1.NBT.1


21)


21 22 24 25 26 28 30


22)


44 45 47 48 49 50 52


23)


57 58 59 62 63 65 66

24)


33 35 36 37 39 40 42

25)


68 70 72 73 75 76 77