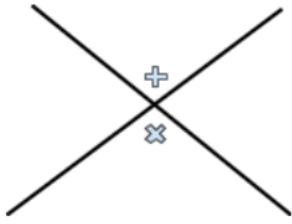


Name: _____

Factor Practice 1

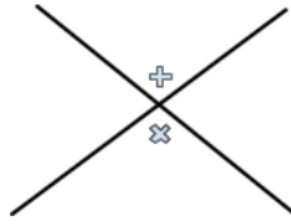
1. $y = x^2 + 8x + 7$

GCF: a: b: c:



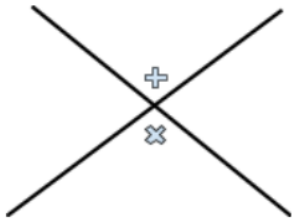
2. $y = x^2 - 11x + 10$

GCF: a: b: c:



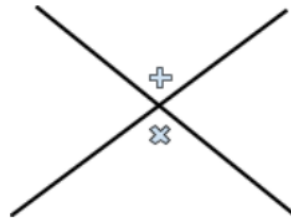
3. $y = x^2 + x - 90$

GCF: a: b: c:



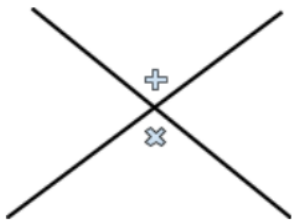
4. $y = x^2 - 4x + 24$

GCF: a: b: c:



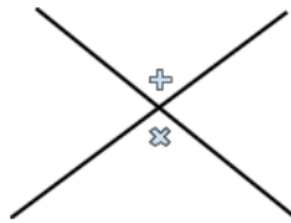
5. $y = x^2 + 16x + 64$

GCF: a: b: c:



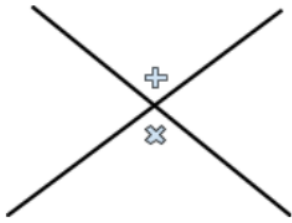
6. $y = x^2 + 4x - 12$

GCF: a: b: c:



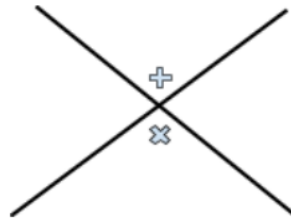
$$7. y = 2x^2 + 6x - 108$$

GCF: a: b: c:



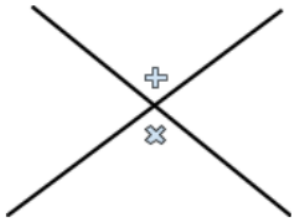
$$8. y = 5x^2 + 10x + 20$$

GCF: a: b: c:



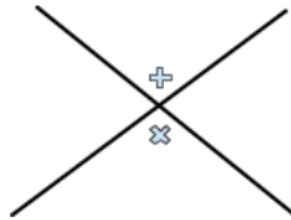
$$9. y = 6x^2 + 66x + 60$$

GCF: a: b: c:



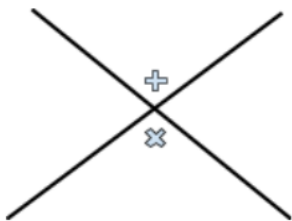
$$10. y = 2x^2 + 22x + 60$$

GCF: a: b: c:



$$11. y = 5x^2 - 30x + 40$$

GCF: a: b: c:



$$12. y = 4x^2 - 4x - 8$$

GCF: a: b: c:

